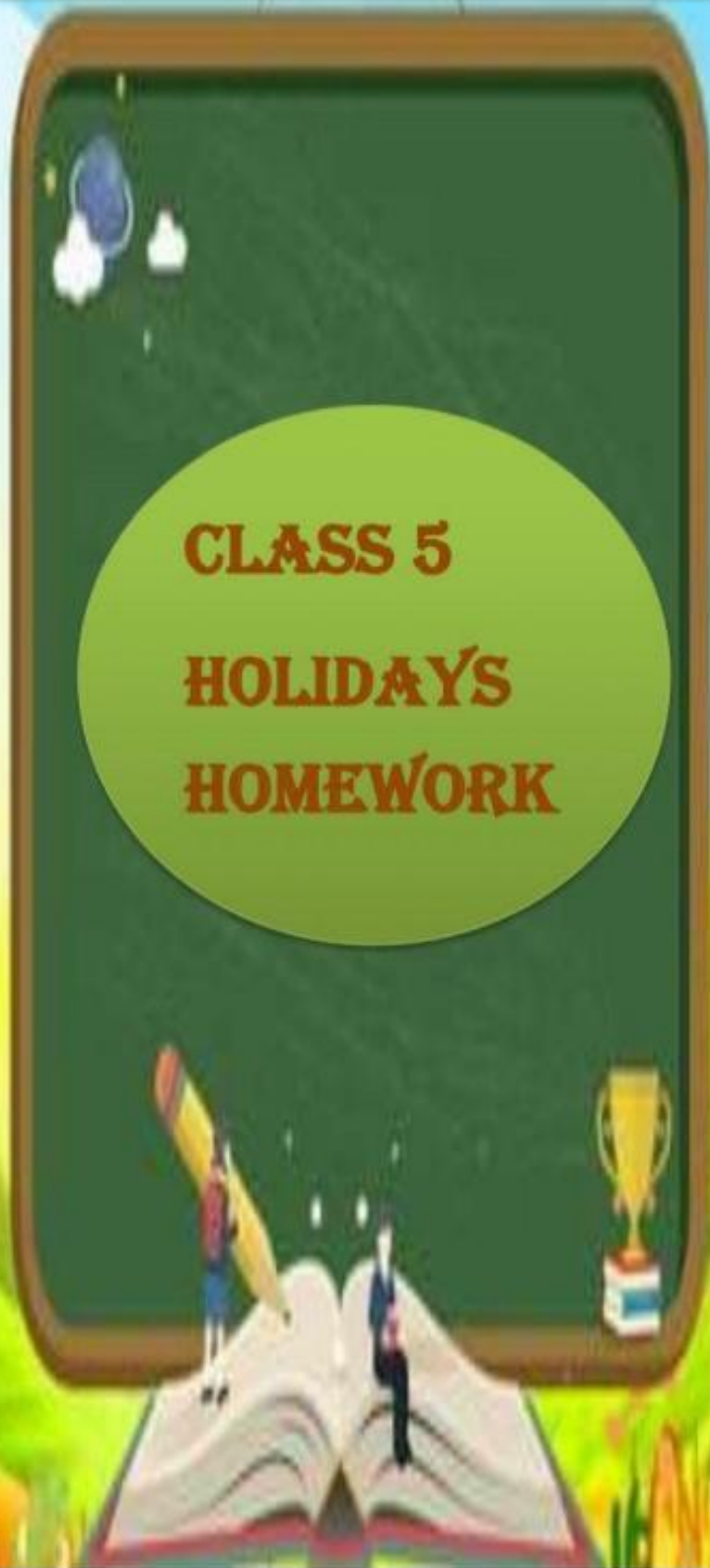


**GREEN LAND SR. SEC. PUBLIC  
SCHOOL**

**CLASS 5  
HOLIDAYS  
HOMEWORK**





INDEX

LANGUAGE

- 1.ENGLISH ASSIGNMENTS
- 2.HINDI ASSIGNMENTS
- 3.PUNJABI ASSIGNMENTS

LET'S EXPLORE

- 1.SOCIAL SCIENCE WORKSHEETS
2. SCIENCE WORKSHEETS
- 3.MATHS WORKSHEETS

UNLOCK YOUR TALENT

1. ART&CRAFT ACTIVITIES
- 2.COMPUTER WORKSHEETS

LET'S LEARN SOMETHING MORAL AND ETHICAL

1. MORALSCIENCE WORKSHEETS

LET'S INCREASE OUR GENERAL KNOWLEDGE

1. G.K.WORKSHEETS

Green Land Sr. Sec.  
Public School


Holiday  
Homework



**E N G L I S H**



**Grade: V**





Green Land Sr. Sec. Public School, Ludhiana

Holidays Homework Worksheet- 1

Grade: V

Subject: English

Week- 1

Day- Monday

## {Reading Comprehension}

People need to be active to be healthy. Our modern lifestyle and all the conveniences we've become used to have made us sedentary—and that's dangerous for our health. Sitting around in front of the TV or the computer, riding in the car for even a short trip to the store and using elevators instead of stairs or ramps all contribute to our inactivity. Physical inactivity is as dangerous to our health as smoking! Add up your activities during the day in periods of at least 10 minutes each. Start slowly... and build up. If you're already doing some light activities, move up to more moderate ones. A little is good, but more is better if you want to achieve health benefits. Scientists say you should accumulate 60 minutes of physical activity every day to stay healthy or improve your health. Time needed depends on effort—as you progress to moderate activities, you can cut down to thirty minutes, four days a week. Physical activity doesn't have to be very hard to improve your health. This goal can be reached by incorporating physical activities into your daily routine. Just add up in periods of at least ten minutes each throughout the day. After three months of regular physical activity, you will notice a difference—people often say getting started is the hardest part.

### 1. On the basis of your reading of the passage, answer these questions.

- Why is physical activity so important for people?
- How can you include physical activity in your life?

### 2. Find the synonyms of:

- a. inactive \_\_\_\_\_ b. including \_\_\_\_\_

### 3. Choose the correct answer.

a. Nowadays people \_\_\_\_\_.

- are less active than in the past.
- are more active than in the past.
- are as sedentary as they used to be.
- all of these

b. Time needed for physical activity depends on \_\_\_\_\_.

- health
- effort
- money
- weather

### 3. Find the Subject and Predicate:

- Physical inactivity is as dangerous to our health as smoking!
- People need to be active to be healthy.

### 4. Rearrange the following sentences:

- needed/ for/ effort/ time/ exercise/ on/ depends

### 5. Pick out the conjunction in the sentence:

- We should do physical activity to be healthy or improve our health.

### 6. Complete the sentence:

- This goal can be reached by incorporating \_\_\_\_\_.





Green Land Sr. Sec. Public School, Ludhiana

Holidays Homework Worksheet- 2

Grade: V

Subject: English

Week- 1

Day- Tuesday

### {Grammar}

**Rearrange the jumbled words into a meaningful sentence:**

1. a/ beautiful / I/ will / for/ myself / buy / watch
2. as/ you/ listen / to/ note/ down / points / It/ is important
3. most/ important / of/ his/ career / match / This/ was the
4. in/ the/ city / many/ garden / There/ are
5. The/ old / honest/ individual / man / was/ an

**Circle the subject and underline the predicate:**

1. The tree branches swayed in the afternoon wind.
2. My sister is performing in the spring play.
3. I walk to school every morning with my mom and dog.
4. The squirrel ran along the back wall.
5. On Saturday, we went to the park to play kickball.





Green Land Sr. Sec. Public School, Ludhiana

Holidays Homework Worksheet- 3

Grade: V

Subject: English

Week- 1

Day- Wednesday

## {Literature}

### Ch-1 What Makes the Lightning

#### Answer the following questions:

1. What activities were included in the humans' festival?
2. How did the animals get ready for their festival?
3. What things did they carry to the festival?
4. According to the folktale, where does the sound of thunder come from?
5. What was the name of the lynx?
6. Why did mole laugh on the owl?
7. What did U Pyrthat do with the U Kui's sword?

#### Read the extracts and answer the questions that follow:

1. *The mole laughed so heartily that his eyes became narrow slits and have remained to this day.*
  - a. Who was the mole laughing at?
  - b. What made him laugh?
  - c. What was the setting of the scene?
2. *They came nicely groomed and preened.*
  - a. Who are referred to as 'they' here?
  - b. Why did they groom and preen themselves?
  - c. Describe how 'they' marched in?



Green Land Sr. Sec. Public School, Ludhiana

Holidays Homework Worksheet- 4

Grade: V

Subject: English

Week- 1

Day- Thursday

### {Writing}

**Make a short story using the following hints. Give a suitable title and moral.**

A boy ..... lost in the jungle ..... finds an old palace  
..... sees a door with a big and heavy lock on it  
..... breaks the lock ..... goes inside .....  
sees a magic book ..... reads that book ..... a miracle  
happens ..... takes the book..... comes  
back home ..... becomes a rich man .

Lined writing area for the student's response.



Green Land Sr. Sec. Public School, Ludhiana

Holidays Homework Worksheet- 5

Grade: V

Subject: English

Week- 1

Day- Friday

## {Read the Story and Give the review}

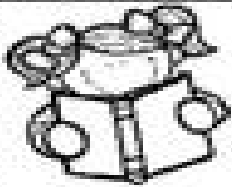
### A man with a golden heart

Once upon a time, the only son of a man was very ill. He went to one of the most famous doctors in the village. When he asked the doctor to see his child, the doctor refused as he was going to play badminton at that time. The man requested him a lot, but the doctor didn't listen to him. After some time, his child died and the man returned to his home crying.

Twenty years later, the same doctor's child was bitten by a snake. Many occultists tried to bring the child live but no one could help him. In the end, the same man, whose child this doctor had refused to see, revived his child with his occult because he knew that tantra.

Consequently, the doctor was ashamed of himself and requested to forgive him, but the man went away from there without saying anything.

**Moral: We should always help the needy because time always changes.**



## Story Review

Title: \_\_\_\_\_

I think the story was: (Color the smiley)



Great!



Good



Okay



Bad

The story was about \_\_\_\_\_

---

---

---

---

Write your name \_\_\_\_\_





Green Land Sr. Sec. Public School, Ludhiana

Holidays Homework Worksheet- 6

Grade: V

Subject: English

Week- 1

Day- Saturday


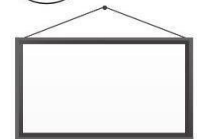


{Fun Activity}

Encircle the things of a classroom. Use help box.



# Classroom

- |               |            |              |            |               |
|---------------|------------|--------------|------------|---------------|
| 1.pencil case | 5.desk     | 9.book       | 12.chair   | 15.whiteboard |
| 2.sharpener   | 6.eraser   | 10.marker    | 13.pen     | 16.pencil     |
| 3.book bag    | 7.scissors | 11.gluestick | 14.crayons | 17.paper      |
| 4.ruler       | 8.notebook |              |            |               |





Green Land Sr. Sec. Public School, Ludhiana

Holidays Homework Worksheet- 7

Grade: V

Subject: English

Week- 2

Day- Monday

## {Reading Comprehension}

### Moving Away

Rohan and Rohit cannot believe that they have to move away from Bangalore. Bangalore is so fabulous! It's so wonderful. It's always been their home. They can play outside all day long---everyday. It is almost always nice and sunny, and all of their friends live. What will they do without Zahir, Raghav, Bunty and Vedant? They will never be able to make such great friends again. However, Rohan and Rohit are very excited for their dad. He has a fantastic new job. The only problem is that the job is in a city way up in the mountains. In Shimla!

Shimla is the capital city of Himachal Pradesh. After learning that it is in Himachal Pradesh, near Chandigarh, both boys are excited about playing in the snow in winters. Rohit has always wanted to learn to ski, and Rohan thinks playing ice hockey will be great fun. Rohan and Rohit also like the location of Shimla. Himachal Pradesh shares its borders with Punjab, Haryana and Uttaranchal in the south and with Jammu and Kashmir in the north. The boys are keen to experience the ride on the toy train that passes through 102 tunnels. Neither of the boys has ever visited this part of the country, so they are looking forward to exploring the new place. If only their friends could come with them! Their parents have promised that they can visit their old friends over the summer break and even invite them over to Shimla. The boys think moving to Shimla will not be so bad after all.

### 1. On the basis of the passage given above answer the following questions:-

- Where do Rohan and Rohit live?
- What is it that they like about Bangalore?

### 2. Find the antonyms of:

- awful
- solution
- ordinary

### 3. Multiple Choice Questions:

#### 1. What is the main reason Rohan and Rohit have to move away from Bangalore?

- Their parents' job opportunities
- Climate change
- They dislike Bangalore
- All of these

#### 2. Which city are Rohan and Rohit moving to?

- Bangalore
- Delhi
- Shimla
- Mumbai

#### 3. What promise do Rohan and Rohit's parents make to them regarding their old friends?

- They can never see them again
- They can only write letters to them
- They can visit them during summer break
- None of these

### 4. Identify the kind of sentence:

- What will Rohit and Rohan do without their friends?
- The boys could play outside all day long in Bangalore.
- Bangalore is so fabulous!



Green Land Sr. Sec. Public School, Ludhiana

Holidays Homework Worksheet- 8

Grade: V

Subject: English

Week- 2

Day- Tuesday

## {Grammar}

### Identify the kinds of sentences:

1. The sky is clear and blue.
2. How are you feeling today?
3. Please turn off the lights before leaving.
4. What a beautiful sight the sunset presents!
5. Elephants are the largest land animals on Earth.
6. Can you pass me the salt, please?
7. Don't forget to water the plants daily.
8. How delicious this cake tastes!
9. The train arrived at the station on time.
10. Why did you choose to study computer science?

#### I. Identify the parts of speech of the underlined words:

1. Shanmugam is a good boy.  
a) pronoun                      b) noun                      c) adverb                      d) adjective
2. Deepak plays tennis.  
a) noun                      b) verb                      c) adjective                      d) conjunction
3. I saw beautiful flower.  
a) adverb                      b) noun                      c) adjective                      d) pronoun
4. Murugan is running fast.  
a) verb                      b) adjective                      c) adverb                      d) preposion
5. Mala writes with a pen in a paper.  
a) conjunction                      b) pronoun                      c) verb                      d) preposion
6. Ravi is poor but he is happy.  
a) preposition                      b) noun                      c) conjunction                      d) adverb



Green Land Sr. Sec. Public School, Ludhiana  
Holidays Homework Worksheet- 9  
Grade: V                      Subject: English  
Week- 2                      Day- Wednesday

**{Literature}**

**Ch-2 Land of Story-books**

**Read the extracts and answer the questions that follow:**

1. *At evening when the lamp is lit,  
around the fire my parents sit;*
  - a. Why do the child's parents sit around the fire in the evening?
  - b. What atmosphere is created by the image of the lamp being lit and the parents sitting around the fire?
2. *And play at books that I have read  
till it is time to go to bed.*
  - a. What does the expression 'play at books' mean in this context?
  - b. When does the speaker stop playing with the books?

**Answer the following questions:**

1. Who were sitting around the firelit?
2. What was the boy holding in the hand?
3. Who came to the river brink to drink water?
4. What does a poet portray in the poem?
5. What does the surroundings transform into?
6. Is it possible to spend one's time meaningfully and fruitfully indoors even without going outside to play. Do you agree with this statement?

Why or why not?





Green Land Sr. Sec. Public School, Ludhiana

Holidays Homework Worksheet- 11

Grade: V

Subject: English

Week- 2

Day- Friday

## {Read the Story and Give the review}

### The Magical Paintbrush

In a small village, there lived a poor but talented artist named Sheena. She dreamed of a magic paintbrush that could bring her paintings to life. One day, an old man gave her a magical paintbrush.

Sheena began to create beautiful paintings, and every stroke of the brush made her creations come alive. She used this power to help her village, making food and shelter for those in need. But word of her magic paintbrush reached a greedy king who demanded it for himself. Sheena refused, and the king grew angry. He sent his soldiers to take the brush by force. When they tried, the brush painted a fierce storm, and the soldiers fled.

Sheena, realizing the brush's potential for misuse, decided to hide it where no one could find it. She continued to use her art to bring happiness and prosperity to her village, teaching them that true magic lies in kindness and creativity.

**Moral: True magic is found in kindness and creativity, not in material possessions.**



## Story Review

Title: \_\_\_\_\_

I think the story was: (Color the smiley)



Great!



Good



Okay



Bad

The story was about \_\_\_\_\_

---

---

---

---

Write your name \_\_\_\_\_



Green Land Sr. Sec. Public School, Ludhiana  
Holidays Homework Worksheet- 12  
Grade: V                      Subject: English  
Week- 2                      Day- Saturday

**{Fun Activity}**

**Find six differences**





Green Land Sr. Sec. Public School, Ludhiana

Holidays Homework Worksheet- 13

Grade: V

Subject: English

Week- 3

Day- Monday

## {Reading Comprehension}

**Read the poem carefully:**

One rainy day on my way home from school,  
I found a big worm and thought it was cool.  
I picked up the worm with my bare hand,  
Held it up high thinking how grand!  
The worm was so cute and wiggled a lot,  
I put him in my pocket to show mom what I 'd caught.  
What will she say when I show her my find?  
Will she let me keep it? I hope she won't mind.  
Mom was in kitchen when I showed her what I 'd found,  
She screamed , " No way! Put it back on the ground!  
Now I'm so angry, she always says " No" ,  
If she won't let me keep it, then I will just go!  
So me and my worm packed a sandwich or two,  
Ran out the door and down the street we both flew.  
We walked to the park and sat on the bench,  
I pulled out my worm and noticed a stench.  
He looked kind of floppy , but wiggled a bit,  
I thought , "Oh my Gosh my worm is not fit!"  
I laid him in the dirt and let him go free,  
I guess that my pocket was not the best place to be .

**On the basis of the reading of the above poem , answer the following questions :**

**Q1 Write the suitable title for the poem**

Ans: \_\_\_\_\_

**Q2 What did the poet find on a rainy day?**

Ans: \_\_\_\_\_

**Q3 What did the poet do with the worm?**

Ans: \_\_\_\_\_

**Q4 Write two pairs of rhyming words from the given poem.**

Ans: \_\_\_\_\_

**Q5. Pick out any two verbs from the poem.**

Ans: \_\_\_\_\_

**Q6. Write antonyms of :**

**i. dropped-**\_\_\_\_\_

**ii. lost-**\_\_\_\_\_

**Q7. Find the word in the poem which means:**

**i. small rapid movements -** \_\_\_\_\_

**ii. estimate -** \_\_\_\_\_





Green Land Sr. Sec. Public School, Ludhiana

Holidays Homework Worksheet- 14

Grade: V

Subject: English

Week- 3

Day- Tuesday

## {Grammar}

### Identify nouns and tell its kinds:

- ❖ The cat chased the mouse around the house.
- ❖ My grandmother baked delicious cookies for us.
- ❖ A flock of birds flew across the sky at sunset.
- ❖ Laughter is the best medicine for a bad day.
- ❖ The students eagerly awaited the results of the exam.
- ❖ The sun set behind the mountains, painting the sky with vibrant colors.
- ❖ The company announced a new product launch next month.
- ❖ The river flowed gently through the forest, reflecting the trees in its clear waters.
- ❖ We watched a thrilling movie at the cinema last night.
- ❖ The team celebrated their victory with cheers and high-fives.

### Rewrite the following sentences changing the nouns given in bold into their plural form.

- The **wolf** chased the **sheep**.
- The **woman** cut the **mango** with a **knife**.
- The **chief** of the **army** got ready for a **war**.
- The **mouse** had made **hole** in the **box**.
- The **child** flew a **kite**.
- The **fairy** played the **piano**.
- The **doctor** pulled out the aching **tooth**.
- Put the **book** on the **shelf**.
- The **bird** made **nest** in the **tree**.



Green Land Sr. Sec. Public School, Ludhiana

Holidays Homework Worksheet- 15

Grade: V

Subject: English

Week- 3

Day- Wednesday

### {Literature}

**Read the extracts and answer the questions that follow:**

1. *'But are you sure that there is anything to be gained by killing the people?'*
  - a. Who said these words and to whom?
  - b. What does the hesitation of the speaker to kill people tell us about the speaker?
2. *'And if he fights—O Rikki!'*
  - a. Who said these words?
  - b. Who is 'he'?
  - c. What does the speaker mean by 'O Rikki!'?

**Answer the following questions:**

1. Where were Nag and Nagaina whispering?
2. Why did Rikki-tikki decide to save the family from all dangers?
3. Who killed the Nag?
4. Why do you think Nag was trying to avoid killing Rikki-tikki?
5. Who was more cunning, Nag or Nagaina? Why?
6. Do you think Rikki-tikki was brave? Give evidence from the story to support your answer.





Green Land Sr. Sec. Public School, Ludhiana

Holidays Homework Worksheet- 17

Grade: V

Subject: English

Week- 3

Day- Friday

## {Read the Story and Give the review}

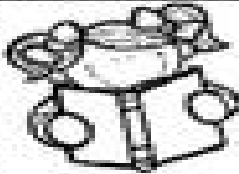
### The Greedy Squirrel

In a peaceful forest, there lived a squirrel named Sammy. Sammy was known for being very greedy. He would collect far more acorns than he needed, leaving his fellow animals with fewer to gather.

One day, a wise old owl named Olivia noticed Sammy's behaviour and decided to teach him a lesson. She offered Sammy a deal. She would give him a magical bag that could hold as many acorns as he wanted, but it came with a catch. For every acorn he put in, he had to give one to his friends.

At first, Sammy grumbled but agreed to the deal. As he began sharing with his friends, he noticed something amazing. The more he gave, the more his friendships grew, and the happier he felt. In the end, he realized that being greedy had never brought him happiness, but sharing and kindness did.

**Moral: Sharing and kindness lead to true happiness, while greed leaves you empty.**



## Story Review

Title: \_\_\_\_\_

I think the story was: (Color the smiley)



Great!



Good



Okay



Bad

The story was about \_\_\_\_\_

---

---

---

---

Write your name \_\_\_\_\_



Green Land Sr. Sec. Public School, Ludhiana  
 Holidays Homework Worksheet- 18  
 Grade: V Subject: English  
 Week- 3 Day- Saturday

{Fun Activity}

# Home sweet home

Match the words to the correct pictures and complete the crossword. Then find a secret message.

- bed
- Cabinets
- Calendar
- Carpet
- ceiling
- fan
- chair
- Curtains
- Cushions
- desk
- drawers
- fireplace
- hall
- Kitchen
- mirror
- lamp
- remote control
- sofa
- telephone
- television
- toilet
- wardrobe



A crossword puzzle grid with 21 numbered starting points for words. The grid is composed of white squares for letters and green squares for empty space. The numbers are placed in colored boxes: 1 (red), 2 (blue), 3 (green), 4 (yellow), 5 (purple), 6 (dark blue), 7 (orange), 8 (dark purple), 9 (teal), 10 (pink), 11 (purple), 12 (red), 13 (dark red), 14 (grey), 15 (dark blue), 16 (red), 17 (cyan), 18 (orange), 19 (yellow), 20 (dark purple), 21 (dark green).

1 2 3 4 5 6 7 8 9 10 11 12 13 14 15 16 17 18 19 20 21



Green Land Sr. Sec. Public School, Ludhiana

Holidays Homework Worksheet- 19

Grade: V

Subject: English

Week- 4

Day- Monday

## {Reading Comprehension}

Today, women stand as self-directed individuals, cognizant of their dignity and pivotal roles in both private and public spheres. Highlighted in the Fourth World Conference of Women in Beijing and the 1995 World Summit for Social Development, the empowerment of women is deemed essential for resolving society's most pressing issues. Despite constitutional provisions granting women equal rights and opportunities, oppressive traditions and lack of awareness hinder their progress. Education emerges as the linchpin for addressing inequality and propelling economic and political advancements for women.

Recognizing the paramount importance of women's roles, it becomes evident that their education is central to future societal prosperity. Studies, including those by the World Bank, underscore the economic benefits of educating girls, advocating that it's not merely a charitable act but a sound investment. However, despite its significance, women's education has often been overlooked by policymakers, as highlighted by the National Commission for Women. The failure to prioritize women's education perpetuates their status as the most marginalized group in society, impeding national progress and perpetuating discrimination.

Despite strides made in various committees and commissions, women's education remains undervalued, hindering broader societal and national development efforts. Discrimination against women persists, depriving them of their rights and impeding their participation in national progress. To truly advance, society must recognize the intrinsic value of women's education and prioritize measures to enhance their status and opportunities.

**1. What is highlighted as the linchpin for addressing inequality and propelling economic and political advancements for women?**

- a) Economic empowerment                      b) Political representation  
c) Education                                        d) Social development

**2. According to the passage, what impedes broader societal and national development efforts despite strides made in various committees and commissions?**

- a) Lack of governmental support              b) Discrimination against women  
c) Economic instability                         d) Inadequate infrastructure

**3. Complete the sentence:**

Discrimination against women persists, \_\_\_\_\_.

**4. According to the passage, where was the empowerment of women highlighted?**

- a) Third World Conference of Women      b) Fourth World Conference of Women in Beijing  
c) World Summit for Social Development in 1995      d) Both b) and c)

**5. According to studies mentioned in the passage, what is the economic benefit of educating girls?**

- a) Charitable act      b) Sound investment      c) Social obligation      d) Mandatory requirement

**6. Which organization underscores the economic benefits of educating girls?**

- a) United Nations                                b) World Bank  
c) National Commission for Women      d) International Monetary Fund



Green Land Sr. Sec. Public School, Ludhiana

Holidays Homework Worksheet- 20

Grade: V

Subject: English

Week- 4

Day- Tuesday

## {Grammar}

**Read the following sentences and identify the type of noun used.**

1. Kolkata is the capital of West Bengal.
2. The Royal Bengal Tiger is found in the Sunderbans.
3. The jury gave a unanimous verdict.
4. Laughter is good for health.
5. The crowd is very big.
6. The elephant is an intelligent animal.
7. The Ganges is a sacred river.
8. The bravery of the soldier saved the day.
9. I bought furniture for my new house.
10. The man was riding a white horse.

### **Change the Gender**

1. The lioness was ready to pounce.
2. The actor acted quite well in the movie.
3. My uncle lives in New York.
4. My father works in a government office.
5. The gentleman gave me this chocolate.
6. The king ruled with sincerity.
7. She was the duchess of Stanford.
8. The waiter brought us our food.
9. The prince succeeded his father.
10. The cock started calling at the break of dawn.



Green Land Sr. Sec. Public School, Ludhiana

Holidays Homework Worksheet- 21

Grade: V

Subject: English

Week- 4

Day- Wednesday

### {Literature}

**Read the extracts and answer the questions that follow:**

1. *You don't need money;*

*Just a disposition sunny;*

- What do you not need money for?
- How will a sunny disposition help?

2. *Just a kindly hand extended;*

*Out to one who's unbefriended;*

*Just the will to give and lend,*

*This will make you someone's friend.*

- What can you do for someone who doesn't have friends?
- How else can you be someone's friend?

**Complete the summary of the poem:**

neighbours   generous   forgive   duties   cheerful   share   wealth

In the first stanza, the poet says we don't need money to be a friend. We just need to be ....., helpful and .....

In the second stanza, the poet tells us about the ..... of friendship. We should be able to ..... our friends easily, encourage our friends in everything, and ..... their sadness.

In the third stanza, the poet tells us that the ..... of friendship is greater than the money we earn for ourselves. When our ..... become our friends, we will be richer than the royals.





# Green Land Sr. Sec. Public School, Ludhiana

## Holidays Homework Worksheet- 22

Grade: V                      Subject: English

Week- 4                      Day- Thursday

### {Writing}

#### TOPIC-PICTURE COMPOSITION

The picture given below shows two girls bullying a smaller girl. Write a story based on it. You may use the following points:

- Where do you think the three girls are?
- Why did the older girls bully the younger girl?
- What did the older girls want from the younger girl?
- How did the younger girl feel?
- What happened to the younger girl in the end?
- Give suitable title to your story.



---

---

---

---

---

---

---

---

---

---

---

---



Green Land Sr. Sec. Public School, Ludhiana

Holidays Homework Worksheet- 23

Grade: V

Subject: English

Week- 4

Day- Friday

## {Read the Story and Give the review}

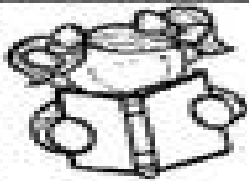
### **The Little Engine That Could**

In a busy toyland, there was a little blue engine who loved to help others. She wasn't the biggest or the strongest, but she had a determined spirit. One day, a big toy train needed to be pulled over a high mountain, but the strong engines refused, saying it was too heavy.

The little blue engine stepped forward and said, "I think I can." With great effort and determination, she started pulling the heavy load up the steep mountain, repeating to herself, "I think I can, I think I can."

Despite the challenge, the little blue engine persevered and successfully carried the load over the mountain. She had shown that determination and a positive attitude could accomplish great things.

**Moral: With determination and a positive attitude, even the smallest can achieve great feats.**



## Story Review

Title: \_\_\_\_\_

I think the story was: (Color the smiley)



Great!



Good



Okay



Bad

The story was about \_\_\_\_\_

---

---

---

---

Write your name \_\_\_\_\_



{Fun Activity}

# A CROSSWORD ON OPPOSITES

Write the opposite of:

- |           |          |           |          |            |           |           |             |
|-----------|----------|-----------|----------|------------|-----------|-----------|-------------|
| 1. large  | 2. ugly  | 3. in     | 4. slow  | 5. dirty   | 6. dry    | 7. summer | 8. white    |
| 9. give   | 10. long | 11. gold  | 12. soft | 13. sharp  | 14. old   | 15. go    | 16. stop    |
| 17. die   | 18. up   | 19. above | 20. left | 21. full   | 22. warm  | 23. new   | 24. whisper |
| 25. round | 26. late | 27. sunny | 28. high | 29. strong | 30. windy | 31. noisy | 32. slim    |
| 33. king  | 34. end  | 35. sour  | 36. sad  | 37. lie    | 38. woman | 39. girl  | 40. yes     |

ग्रीन लैंड सीनियर सैकेंडरी  
पब्लिक स्कूल , लुधियाना  
कक्षा पाँचवीं विषय - हिंदी  
ग्रीष्मावकाश गृहकार्य पत्रिकाएँ

ग्रीन लैंड सीनियर सैकेंडरी पब्लिक स्कूल, लुधियाना

विषय-हिंदी कक्षा-पाँचवीं कार्यपत्रिका नं.-1

“ अपठित गद्यांश “

अपठित जो पहले न पढ़ा गया हो। गद्य + अंश अर्थात् गद्य का अंश । अर्थ ग्रहण, मौलिक चिंतन तथा पढ़कर स्वयं हल ढूँढ़ने की क्षमता का विकास। अपठित गद्यांश को दो-तीन बार ध्यान से पढ़िए फिर प्रश्नों को ध्यानपूर्वक पढ़िए । प्रश्नों को पढ़कर गद्यांश में उनके उत्तरों पर निशान लगाएँ। प्रश्नों के उत्तर अपने शब्दों में लिखे। उत्तर संक्षेप में तथा गद्य पर आधारित हो । गद्यांश का शीर्षक दो-तीन शब्दों में देना चाहिए। प्रश्नोत्तर की भाषा शैली सरल, संक्षिप्त तथा स्पष्ट होनी चाहिए।

निम्नलिखित गद्यांश को पढ़िए और पूछे गए प्रश्नों के सही उत्तर लिखिए:-

मनुष्य की विशेषता उसके चरित्र में है। चरित्र के कारण ही एक मनुष्य दूसरे से अधिक आदरणीय समझा जाता है। विद्या का मान सज्जन तभी करते हैं जब विद्यावान विनय एवं चरित्र से युक्त हो। विद्या, बल तथा पद होते हुए भी रावण अपने राक्षसी कर्म के कारण निंदनीय था। रावण विद्यावान होने पर भी वंदनीय नहीं बन पाया। मनुष्य का मूल्य उसके चरित्र में है। विनय, उदारता, लालच में न पड़ना, धैर्य, सत्य भाषण, वचन का प्रतिपालन करना और कर्तव्य परायण ये सब गुण चरित्र में आते हैं।

प्रश्न: 1) मनुष्य की विशेषता किसमें है ?

क) उसके पद में           ख) उसके धन में

ग) उसके अच्छे विचारों में   घ) उसके चरित्र में

2) मनुष्य का आदर किन कारणों से होता है ?

क) चरित्र के कारण   ख) पद के कारण

ग) विचार के कारण   घ) तीनों विकल्प सही हैं

3) रावण निंदनीय क्यों था ?

क) विद्या के कारण   ख) बल के कारण

ग) पद के कारण   घ) राक्षसी कर्म के कारण

4) चरित्र में कौन-कौन से गुण आते हैं ?

क) विनय और उदारता   ख) सत्य और धैर्य

ग) कर्तव्य परायण   घ) उपरोक्त सभी

5) 'गुण' शब्द का विलोम शब्द है-

क) निर्गुण      ख) अवगुण

ग) सदगुण      घ) महागुण

6) "अपमान" का विलोम शब्द है-

क) मान      ख) दान

ग) शान      घ) ज्ञान

7) गद्यांश का उचित शीर्षक क्या होगा ?

क) विद्या      ख) बुद्धि

ग) चरित्र      घ) अवगुण

8) खाली स्थान भरो:-

क) रावण ----- होने पर भी ----- नहीं बन पाया ।

ग्रीन लैंड सीनियर सैंकेंडरी पब्लिक स्कूल, लुधियाना

विषय- हिंदी कक्षा- पाँचवीं कार्यपत्रिका नं.-2

“आओ अभ्यास करें व्याकरण का”

पर्यायवाची शब्द

1) निम्नलिखित शब्दों का उनके उचित पर्यायवाची शब्दों से मिलान कीजिए -:

- |             |                  |
|-------------|------------------|
| (क) पक्षी   | 1) शशाक, राकेश   |
| (ख) मित्र   | 2) सखा, सहचर     |
| (ग) बिजली   | 3) पवन, समीर     |
| (घ) हवा     | 4) साग, विहग     |
| (ङ) चंद्रमा | 5) दामिनी, चंचला |

2) वाक्य में आए रंगीन शब्दों के लिंग बदलकर वाक्य दोबारा लिखो -:

- 1) लड़का खेल रहा है।
- 2) जंगल में मोर नाच रहा है।
- 3) पिताजी कार चला रहे हैं।
- 4) अध्यापक कक्षा में पढ़ा रहे हैं।
- 5) घोड़ा तेज दौड़ता है।

ग्रीन लैंड सीनियर सैकेंडरी पब्लिक स्कूल, लुधियाना

विषय- हिंदी कक्षा- पाँचवीं कार्यपत्रिका नं.-3

(1) पठित गद्यांश

अपनी पाठ्य पुस्तक में से पृष्ठ संख्या 42 का अध्ययन कर नीचे दिए गए प्रश्नों के सही उत्तर दीजिए -:

आज सवेरे काम किए मैंने कुछ अच्छे।  
आज सवेरे गया पार्क में देखा मैंने फूलों को,  
फूलों को देखा तो भाई समझ गया मैं भूलों को ।  
तय कर डाला मस्त रहूँगा और हँसूँगा खिल-खिल-खिल,  
मेहनत से हर काम करूँगा दिखलाऊँगा कुछ बनकर।  
आकर होमवर्क कर डाला फिर पौधों में पानी डाला,  
पापा बोले-देखो-देखो, ऐसे होते अच्छे बच्चे ।  
बैठ धूप में देखा मैंने चिड़ियों को कथा सुनाते,  
पहली बार पेड़ को देखा हौले-हौले मुसकाते।  
सजा हुआ था आसमान में रंगों का प्यारा मेला,  
आहा, अपना जीवन भी है सचमुच कैसा अलबेला।  
मैंने कविता एक बनाई सुनकर झट दीदी मुसकाई,  
सुंदर और बनेगी दुनिया काम करें हम अच्छे-अच्छे ।

प्रश्न-1 ऊपर दी गई कविता के लेखक का क्या नाम है ?

प्रश्न-2 कविता में " मैं " कौन है ?

प्रश्न-3 पौधों में पानी किसने डाला ?

प्रश्न-4 लेखक ने हौले-हौले मुसकाते किसको देखा था ?

प्रश्न-5 कविता में कथा कौन सुना रहा है ?

प्रश्न-6 आसमान में किसका मेला लगा हुआ है ?

प्रश्न-7 किसने कविता बनाकर किसे सुनाई ?

प्रश्न-8 दिए गए शब्दों के वचन बदलो -:

फूल , भूल , पौधे , बच्चा , चिड़िया , रंग



ग्रीन लैंड सीनियर सेकेंडरी पब्लिक स्कूल , लुधियाना  
विषय- हिंदी कक्षा पाँचवीं कार्यपत्रिका नं.-4  
अच्छे लोग, बुरे लोग

बहुत समय पहले की बात है। एक बार एक गुरुजी गंगा किनारे स्थित एक गाँव में अपने शिष्यों के साथ स्नान कर रहे थे। तभी एक राहगीर आया और उनसे पूछा, 'महाराज, इस गाँव में कैसे लोग रहते हैं, दरअसल, मैं अपने मीजुदा निवास स्थान से कहीं और जाना चाहता हूँ ?' गुरुजी बोले, 'जहाँ तुम अभी रहते हो, वहाँ किस प्रकार के लोग रहते हैं ?' मत पूछिए महाराज, 'वहाँ तो एक से एक कपटी, दुष्ट और बुरे लोग बसे हुए हैं।' राहगीर बोला। गुरु जी बोले, 'इस गाँव में भी बिलकुल उसी तरह के लोग रहते हैं, कपटी, दुष्ट, बुरे।' यह सुनकर राहगीर आगे बढ़ गया। कुछ समय बाद एक दूसरा राहगीर वहाँ से गुजरा। उसने भी गुरु जी से वही प्रश्न पूछा, 'मुझे किसी नयी जगह में रहना है, क्या आप बता सकते हैं कि इस गाँव में कैसे लोग रहते हैं ?' 'जहाँ तुम अभी निवास करते हो वहाँ किस प्रकार के लोग रहते हैं ?' गुरु जी ने इस राहगीर से भी वही प्रश्न पूछा। 'जी, वहाँ तो बड़े सभ्य, सुलझे और अच्छे लोग रहते हैं।' राहगीर बोला। 'तुम्हें बिलकुल उसी प्रकार के लोग यहाँ भी मिलेंगे, सभ्य, सुलझे और अच्छे।' गुरुजी ने अपनी बात पूर्ण की और दैनिक कार्यों में लग गए। पर उनके शिष्य ये सब देख रहे थे और राहगीर के जाते ही उन्होंने पूछा, 'क्या कीजियेगा गुरुजी, पर आपने दोनों राहगीरों को एक ही स्थान के बारे में अलग-अलग बातें क्यों बतायीं। गुरुजी गंभीरता से बोले, 'शिष्यो, आमतौर पर हम चीजों को वैसे नहीं देखते हैं, जैसी वे हैं, बल्कि उन्हें हम ऐसे देखते हैं जैसे कि हम खुद हैं। हर जगह हर प्रकार के लोग होते हैं, यह हम पर निर्भर करता है कि हम किस तरह के लोगों को देखना चाहते हैं।' शिष्य उनकी बात समझ चुके थे और आगे से उन्होंने जीवन में सिर्फ अच्छा पर ही ध्यान केन्द्रित करने का निश्चय किया।

उपरोक्त कहानी को पढ़कर नीचे दिए गए प्रश्नों के उत्तर दीजिए:-

क) इस कहानी को पढ़कर आपको क्या शिक्षा मिलती है ?

ख) पहले राहगीर को गुरु जी ने क्या उत्तर दिया ?

ग) अपने माता-पिता से ऐसी ही कोई एक प्रेरणादायक कहानी सुनकर उसका एक चलचित्र (वीडियो 10 से 15 सेकंड

का) तैयार कीजिए।


घ) कहानी में से विलोम शब्द छाँटकर लिखिए:-

शहर , जाना , गुरु , मरण , बुरा

ग्रीन लैंड सीनियर सैकेंडरी पब्लिक स्कूल, लुधियाना

विषय- हिंदी कक्षा- पाँचवीं कार्यपत्रिका नं.-5

(1) नीचे दिए गए चित्रों को देखकर 8 से 10 पंक्तियाँ लिखो।







**PUNJABI**  
**HOLIDAY HOMEWORK**

ਵਿਸ਼ਾ: ਪੰਜਾਬੀ

ਜਮਾਤ: ਪੰਜਵੀ (ਦੂਸਰਾ ਹਫ਼ਤਾ)

ਪੰਜਾਬੀ ਅਸਾਇਨਮੈਂਟ ( ਛੁੱਟੀਆਂ ਦਾ ਕੰਮ)

ਹੇਠ ਲਿਖੇ ਅਣਡਿੱਠੇ ਪੈਰ੍ਹੇ ਨੂੰ ਪੜ੍ਹ ਕੇ ਪੁੱਛੇ ਗਏ ਪ੍ਰਸ਼ਨਾਂ ਦੇ ਉੱਤਰ ਦਿਓ:-

16

ਸੈਰ ਸਭ ਤੋਂ ਲਾਭਦਾਇਕ ਕਸਰਤ ਹੈ। ਸਵੇਰ ਦੀ ਸੈਰ ਕਰਨ ਨਾਲ ਮਨੁੱਖ ਨੂੰ ਸਵੇਰੇ ਜਲਦੀ ਉੱਠਣ ਦੀ ਆਦਤ ਪੈਂਦੀ ਹੈ। ਇਸ ਵੇਲੇ ਠੰਡੀ ਤੇ ਮਹਿਕ ਭਰੀ ਹਵਾ ਸਰੀਰ ਵਿੱਚ ਨਵੀਂ ਚੇਤਨਾ ਅਤੇ ਅਰੋਗਤਾ ਭਰ ਦਿੰਦੀ ਹੈ। ਮਨੁੱਖ ਸਾਰਾ ਦਿਨ ਖੁਸ਼ ਰਹਿੰਦਾ ਹੈ। ਸਰੀਰ ਵਿੱਚ ਚੁਸਤੀ ਤੇ ਫੁਰਤੀ ਆਉਂਦੀ ਹੈ। ਸਵੇਰ ਦੀ ਸੈਰ ਹਰ ਉਮਰ ਦੇ ਵਿਅਕਤੀ ਲਈ ਬਹੁਤ ਜ਼ਰੂਰੀ ਹੈ। ਇਸ ਦਾ ਮਨੁੱਖੀ ਸਰੀਰ ਉੱਤੇ ਕਾਫ਼ੀ ਅਸਰ ਪੈਂਦਾ ਹੈ। ਸਾਨੂੰ ਸਾਰਿਆਂ ਨੂੰ ਸਵੇਰੇ ਉੱਠ ਕੇ ਖੁੱਲ੍ਹੀ ਥਾਂ 'ਤੇ ਸੈਰ ਕਰਨੀ ਚਾਹੀਦੀ ਹੈ। ਇਸ ਸਮੇਂ ਦੀ ਤਾਜ਼ੀ ਹਵਾ ਮਨੁੱਖੀ ਦਿਮਾਗ ਨੂੰ ਤਾਜ਼ਗੀ ਦਿੰਦੀ ਹੈ। ਬਿਮਾਰ ਵਿਅਕਤੀ ਲਈ ਸਵੇਰ ਦੀ ਸੈਰ ਬਹੁਤ ਲਾਭਦਾਇਕ ਹੈ ਕਿਉਂਕਿ ਇਹ ਕਈ ਬਿਮਾਰੀਆਂ ਦਾ ਟਾਕਰਾ ਕਰਦੀ ਹੈ।

ਪ੍ਰਸ਼ਨ

1. ਸਵੇਰ ਦੀ ਸੈਰ ਕਿਹੜੀ ਉਮਰ ਦੇ ਵਿਅਕਤੀ ਲਈ ਬਹੁਤ ਜ਼ਰੂਰੀ ਹੈ ?
2. ਸਵੇਰ ਦੀ ਸੈਰ ਕਰਨ ਨਾਲ ਮਨੁੱਖ ਨੂੰ ਕਿਹੜੀ ਆਦਤ ਪੈਂਦੀ ਹੈ ?
3. ਸਾਨੂੰ ਸਾਰਿਆਂ ਨੂੰ ਸਵੇਰੇ ਉੱਠ ਕੇ ਕਿਹੜੀ ਥਾਂ 'ਤੇ ਸੈਰ ਕਰਨੀ ਚਾਹੀਦੀ ਹੈ?
4. ਬਿਮਾਰ ਵਿਅਕਤੀ ਲਈ ਸਵੇਰ ਦੀ ਸੈਰ ਕਿਉਂ ਲਾਭਦਾਇਕ ਹੈ ?
5. ਸਵੇਰ ਵੇਲੇ ਦੀ ਠੰਡੀ ਤੇ ਮਹਿਕ ਭਰੀ ਹਵਾ ਸਰੀਰ ਵਿੱਚ ਕੀ ਭਰ ਦਿੰਦੀ ਹੈ ?

ਪ੍ਰਸ਼ਨ 1. ਵਿਰੋਧੀ ਸ਼ਬਦ ਕਿਸ ਨੂੰ ਆਖਦੇ ਹਨ ?

ਹੇਠ ਲਿਖੇ ਸ਼ਬਦਾਂ ਦੇ ਵਿਰੋਧੀ ਸ਼ਬਦ ਲਿਖੋ:-

1. ਸਸਤਾ
2. ਹਾਨੀ
3. ਬੂਠ
4. ਕੇੜਾ
5. ਗੁਣ

ਪ੍ਰਸ਼ਨ 2 ਹੇਠ ਦਿੱਤੀ ਤਸਵੀਰ ਦੇਖ ਕੇ ਕੋਈ ਪੰਜ ਵਾਕ ਲਿਖੋ:-



ਦੂਸਰਾ ਹਫ਼ਤਾ

ਜਮਾਤ ਪੰਜਵੀਂ

ਬੱਚਿਓ ਰੋਣਕ ਪੰਜਾਬੀ ਪੁਸਤਕ ਦੇ ਪੰਨਾ ਨੰਬਰ 35,36 ਨੂੰ ਪੜ੍ਹ ਕੇ ਹੇਠ ਲਿਖੇ ਪ੍ਰਸ਼ਨਾਂ ਦੇ ਉੱਤਰ ਦਿਓ:-

- ੳ) ਗੁਰਨੇਕ ਦਾ ਸੁਭਾਅ ਕਿਹੋ ਜਿਹਾ ਸੀ?
- ਅ) ਗੁਰਨੇਕ ਕਿਹੜੀ ਜਮਾਤ ਵਿੱਚ ਪੜ੍ਹਦਾ ਸੀ?
- ੲ) ਗੁਰਨੇਕ ਪੜ੍ਹਾਈ ਵਿੱਚ ਕਿਹੋ ਜਿਹਾ ਸੀ?
- ਸ) ਗੁਰਨੇਕ ਦੇ ਮਾਤਾ ਜੀ ਕੀ ਕੰਮ ਕਰਦੇ ਸਨ?
- ਹ) ਗੁਰਨੀਤ ਦੀ ਭੈਣ ਕਿਹੜੀ ਜਮਾਤ ਵਿੱਚ ਪੜ੍ਹਦੀ ਸੀ?
- ਕ) ਸਾਨੂੰ ਇਸ ਪਾਠ ਤੋਂ ਕੀ ਸਿੱਖਿਆ ਮਿਲਦੀ ਹੈ?

ਵਿਸ਼ਾ : ਪੰਜਾਬੀ

ਜਮਾਤ: ਪੰਜਵੀਂ

ਹੇਠ ਲਿਖੀ ਕਹਾਣੀ ਨੂੰ ਪੜ੍ਹ ਕੇ ਪੁੱਛੇ ਗਏ ਪ੍ਰਸ਼ਨਾਂ ਦੇ ਉੱਤਰ ਦਿਓ-

ਇਕ ਵਾਰ ਦੀ ਗੱਲ ਹੈ ਕਿ ਇਕ ਕੁਰਮੂ ਨਾਮ ਦਾ ਮੁੰਡਾ ਸੀ। ਉਸਦੀ ਉਮਰ 10 ਸਾਲ ਸੀ। ਉਹ ਪੜ੍ਹਾਈ ਤਾਂ ਕਰਦਾ ਸੀ ਪਰ ਫਿਰ ਵੀ ਉਸਦੇ ਪੇਪਰਾਂ ਵਿੱਚ ਚੰਗੇ ਨੰਬਰ ਨਹੀਂ ਆਉਂਦੇ ਸਨ। ਇਕ ਵਾਰ ਉਸਦੀ ਮਾਂ ਨੂੰ ਅਧਿਆਪਕਾ ਨੇ ਸਕੂਲ ਬੁਲਾ ਕੇ ਕੁਰਮੂ ਦੀ ਪੜ੍ਹਾਈ ਵਿੱਚ ਕਮਜ਼ੋਰ ਹੋਣ ਦੀ ਗੱਲ ਕਹੀ। ਕੁਰਮੂ ਦੀ ਮਾਂ ਨੂੰ ਸਾਰੀ ਗੱਲ ਸਮਝ ਆ ਗਈ। ਉਸਦੀ ਮਾਂ ਨੇ ਸੋਚਿਆ ਕਿ ਕੁਰਮੂ ਪੜ੍ਹਦਾ ਤਾਂ ਹੈ ਪਰ ਉਹ ਲਿਖਣ ਵਿੱਚ ਆਲਸ ਕਰਦਾ ਹੈ ਜਿਸ ਕਰਕੇ ਉਹ ਪੜ੍ਹਾਈ ਵਿੱਚ ਪਿੱਛੇ ਰਹਿ ਗਿਆ ਹੈ। ਅਗਲੇ ਦਿਨ ਕੁਰਮੂ ਸਕੂਲ ਤੋਂ ਆਇਆ ਤਾਂ ਉਸਦੀ ਮਾਂ ਨੇ ਉਸਨੂੰ ਇਕ ਸਿਆਹੀ ਦੀ ਦਵਾਤ ਦਿੱਤਿਆ ਕਿਹਾ ਕਿ ਇਹ ਜਾਦੂ ਦੀ ਸਿਆਹੀ ਹੈ। ਜੇਕਰ ਉਹ ਇਸ ਨਾਲ ਲਿਖੇਗਾ ਤਾਂ ਉਸਦੇ ਪੇਪਰਾਂ ਵਿੱਚੋਂ ਚੰਗੇ ਨੰਬਰ ਆਉਣਗੇ। ਕੁਰਮੂ ਨੇ ਹਰ ਰੋਜ਼ ਯਾਦ ਕੀਤਾ ਹੋਇਆ ਕੰਮ ਉਸ ਸਿਆਹੀ ਨਾਲ ਲਿਖ ਕੇ ਵੇਖਣਾ ਸ਼ੁਰੂ ਕਰ ਦਿੱਤਾ। ਉਹ ਪੜ੍ਹਾਈ ਵਿੱਚ ਵੀ ਹੁਸ਼ਿਆਰ ਹੋ ਗਿਆ। ਇਕ ਵਾਰ ਉਸਦੇ ਪੱਕੇ ਪੇਪਰ ਚੁੱਲ੍ਹ ਰਹੇ ਸਨ ਤਾਂ ਉਹ ਸਿਆਹੀ ਖਤਮ ਹੋ ਗਈ। ਉਸਨੇ ਆਪਣੀ ਮਾਂ ਨੂੰ ਕਿਹਾ ਕਿ ਮੇਰਾ ਇਕ ਪੇਪਰ ਰਹਿੰਦਾ ਹੈ ਪਰ ਮੇਰੀ ਜਾਦੂ ਦੀ ਸਿਆਹੀ ਖਤਮ ਹੋ ਗਈ ਹੈ ਹੁਣ ਮੈਂ ਉਸ ਪੇਪਰ ਵਿੱਚੋਂ ਫੈਲੂ ਹੋ ਜਾਵਾਂਗਾ। ਉਸਦੀ ਮਾਂ ਨੇ ਉਸ ਨੂੰ ਦੱਸਿਆ ਕਿ ਉਹ ਕੋਈ ਜਾਦੂ ਦੀ ਸਿਆਹੀ ਨਹੀਂ ਸੀ। ਉਹ ਤਾਂ ਆਮ ਜਿਹੀ ਸਿਆਹੀ ਸੀ। ਉਹ ਸਿਆਹੀ ਉਸਨੇ ਉਸਨੂੰ ਇਸ ਲਈ ਦਿੱਤੀ ਸੀ ਕਿ ਉਹ ਮਿਹਨਤ ਕਰਨਾ ਸਿੱਖ ਜਾਵੇ। ਜਦੋਂ ਉਹ ਪਹਿਲਾਂ ਪੜ੍ਹਾਈ ਕਰਦਾ ਸੀ ਤਾਂ ਕਦੇ ਵੀ ਲਿਖ ਕੇ ਨਹੀਂ ਵੇਖਦਾ ਸੀ ਜਿਸ ਕਾਰਨ ਉਹ ਭੁੱਲ ਜਾਂਦਾ ਸੀ। ਇਸ ਲਈ ਉਸ ਨੂੰ ਲਿਖਣ ਦੀ ਆਦਤ ਪਾਉਣ ਲਈ ਹੀ ਉਸਦੀ ਮਾਂ ਨੇ ਉਸਨੂੰ ਇਹ ਸਿਆਹੀ ਦਿੱਤੀ ਸੀ। ਜੇਕਰ ਇਨਸਾਨ ਮਿਹਨਤ ਕਰਦਾ ਹੈ ਤਾਂ ਉਹ ਜ਼ਰੂਰ ਸਫਲ ਹੁੰਦਾ ਹੈ। ਕੁਰਮੂ ਨੂੰ ਅਸਲੀ ਜਾਦੂ ਦੀ ਸਮਝ ਆ ਗਈ ਸੀ। ਹੁਣ ਉਸਨੇ ਉਹ ਆਖਰੀ ਪੇਪਰ ਹੋਰ ਸਿਆਹੀ ਲਿਆ ਕੇ ਦਿੱਤਾ। ਉਹ ਪ੍ਰੀਖਿਆ ਵਿੱਚੋਂ ਪਹਿਲੇ ਦਰਜੇ ਤੇ ਆਇਆ। ਉਸਦੀ ਮਾਂ ਬੜੀ ਖੁਸ਼ ਹੋਈ।



## ਪ੍ਰਸ਼ਨ-

1. ਮਿਹਨਤ ਨਾਲ ਕੀ ਪ੍ਰਾਪਤ ਕੀਤਾ ਜਾ ਸਕਦਾ ਹੈ?
2. ਕੀ ਤੁਸੀਂ ਆਪਣੇ ਦੁਆਰਾ ਯਾਦ ਕੀਤੇ ਪਾਠ ਨੂੰ ਲਿਖ ਕੇ ਵੇਖਦੇ ਹੋ?
3. ਯਾਦ ਕੀਤਾ ਵਿਸ਼ਾ ਲਿਖ ਕੇ ਵੇਖਣ ਨਾਲ ਕੀ ਹੁੰਦਾ ਹੈ?
4. ਪਰੀਖਿਆ ਵਿੱਚ ਸਫਲ ਹੋਣ ਲਈ ਕੀ ਜ਼ਰੂਰੀ ਹੈ?
5. ਕਰਮੂ ਸਿਆਹੀ ਨੂੰ ਕਿਹੜੀ ਸਿਆਹੀ ਸਮਝਦਾ ਸੀ?

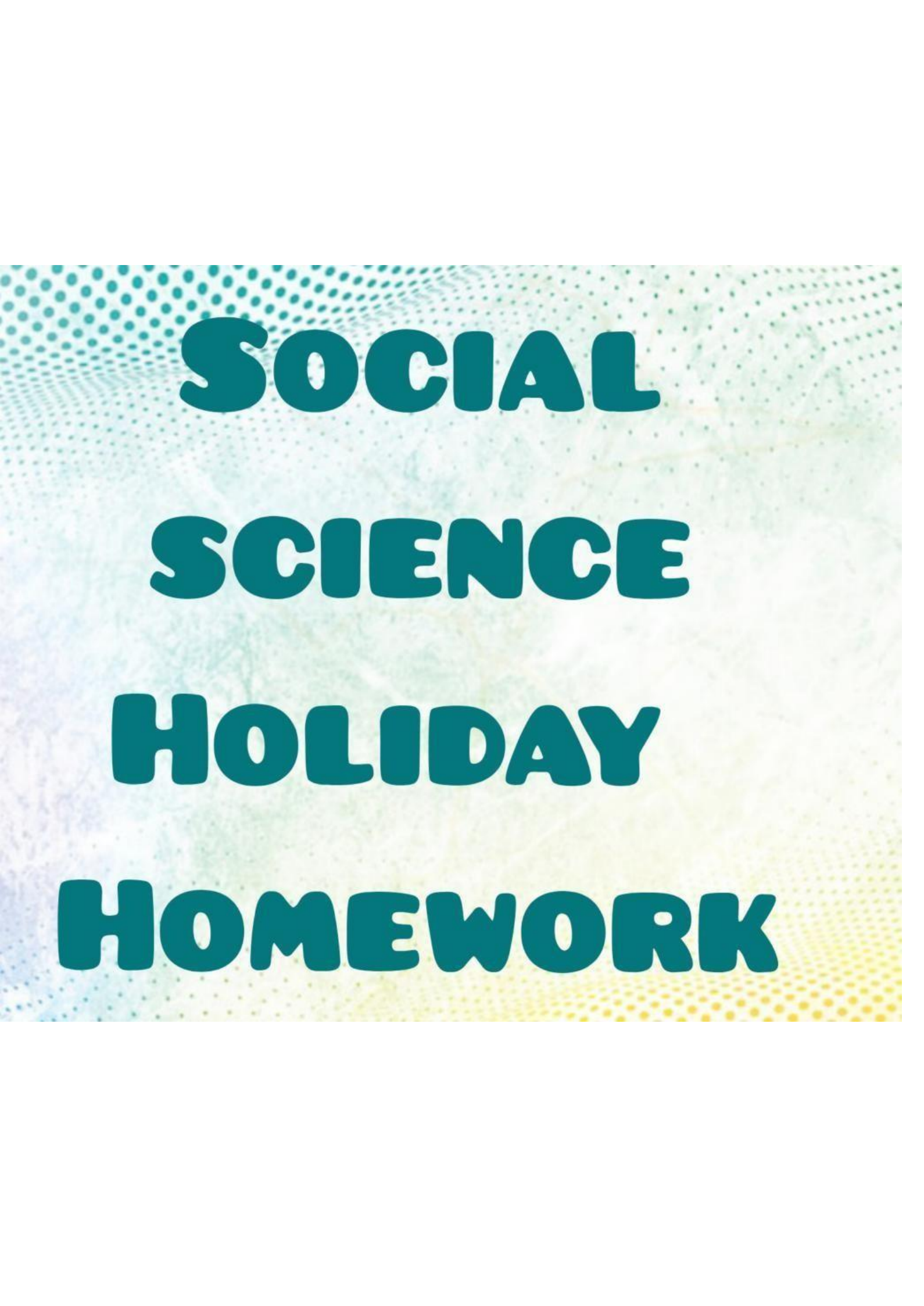


ਤਸਵੀਰਾਂ ਦੇਖ ਕੇ ਕਹਾਣੀ ਦੀ ਰਚਨਾ ਕਰੋ-

ਕਹਾਣੀ-ਖਰਗੋਸ਼ ਅਤੇ ਕੱਛੂਕੁੰਮਾ



ਕਹਾਣੀ-ਸ਼ੇਰ ਅਤੇ ਚੂਹੀ



**SOCIAL  
SCIENCE  
HOLIDAY  
HOMEWORK**

# SUBJECT- SOCIAL SCIENCE

## CLASS-V

### THIS IS MY WORLD

Do you know your 7 continents? Find them on the map and label them.



www.khanacademy.com/business/13717

North America

South America

Europe

Africa

Asia

Australia

Antarctica

13:53



# SUBJECT-SOCIAL SCIENCE

## The Five Oceans of the World

Label the oceans using the word box.

### CLASS-V

Arctic Ocean    Atlantic Ocean    Indian Ocean    Pacific Ocean    Southern Ocean

# GRADE-V

Choose the correct term

that can be replaced easily or re-used over and over.

that are available in fixed quantities or used faster than it can be replaced.

Click the pictures below and move it to where it best fit in the table

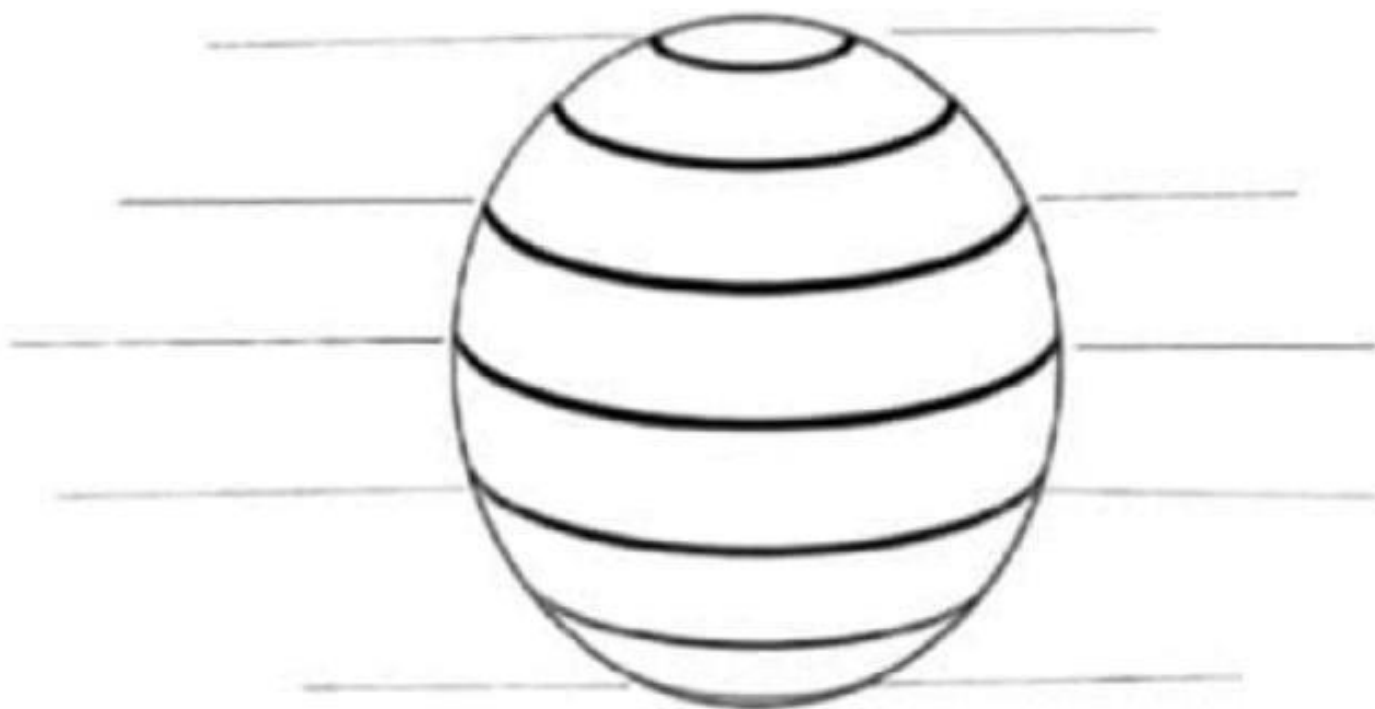
Renewable resources	Non-renewable resources



Label the following diagram **CLASS-V**

Lines of latitude

Degree-direction



Fill in the blanks.

a. The longitudes run from \_\_\_\_\_ to \_\_\_\_\_.

b. There are \_\_\_\_\_ important lines of latitude.

c. The  $0^\circ$  latitude is known as \_\_\_\_\_.

d. The earth spins on an imaginary line, known as the \_\_\_\_\_ of the Earth.

e. The Equator runs through the continent of \_\_\_\_\_.

# GRADE-V

## LATITUDE OR LONGITUDE?

Draw the boxes into the correct columns

	
LATITUDE	LONGITUDE

- Lines that run north and south.
- These lines are called parallels.
- Lines extending around the Earth horizontally.
- Measure distance east or west.
- The Equator is at 0° degrees
- The Prime Meridian, in Greenwich, is at 0°
- Lines run east or west.
- These lines are called meridians.
- The lines running vertically around the Earth.
- Measure distance north or south.

# GRADE-V

## Natural Resources

resources can be replaced by natural processes  
in a short period of time

Examples:



resources are used faster than they can be  
replaced by natural processes.


Examples:







# The Solar System **Grade-V**

**Subject -Social Science**





## Layers of the Atmosphere (Worksheet)

**Q.1.** Label the diagram of the layers of the atmosphere, using the keywords below.

- |                |                |               |
|----------------|----------------|---------------|
| • Stratosphere | • Thermosphere | • Troposphere |
| • Mesosphere   | • Ozone layer  | • Exosphere   |



**Q.2.** Write **T** or **True** if the statement is true; write **F** or **False** if the statement is false.

\_\_\_\_\_ 1. Ozone is a gas made up of four oxygen atoms.

\_\_\_\_\_ 2. In addition to Earth, many of the other planets in the Solar System have atmospheres.

\_\_\_\_\_ 3. The main function of the ozone layer is to shield the Earth from the harmful ultraviolet rays of the sun.



## Check Out the Atmosphere

One of Dr. X's thugs was talking to another. Can you make sense of what he said? Fill in the missing words. Make sure each is the right part of speech.

I asked Dr. X what was between us and space. He said the \_\_\_\_\_, He said it was

NOUN

like a \_\_\_\_\_ of air surrounding the earth. What does it do, I \_\_\_\_\_.

VERB

Dr. X explained. "First, the atmosphere

\_\_\_\_\_ all the plant and animal life

VERB

on \_\_\_\_\_, It protects us from harmful

NOUN

\_\_\_\_\_ and very hot or cold

NOUN

temperatures. Also, it \_\_\_\_\_ oxygen,

VERB

the gas we need to breathe. Without the atmosphere,

the earth might \_\_\_\_\_ like Mars—a barren,

VERB

lifeless planet. I \_\_\_\_\_ that

VERB

I like atmosphere.

look  
blanket  
wandered  
atmosphere  
earth  
decided  
supports  
provides  
radiation



Is "atmosphere" here?



Atmosphere has another meaning. Have you been to the Squishy Juice Bar or Jimmy's Junk Yard? The "atmosphere" in those places is a little different. Can you describe what that kind of atmosphere means?



# How to Plant Seeds



**Directions:** Using the words in the box, fill in the blanks below.

sun      water      pot      soil  
seeds      hole      finger      plant



Place some \_\_\_\_\_  into a \_\_\_\_\_ 


Make a \_\_\_\_\_  with your \_\_\_\_\_ 

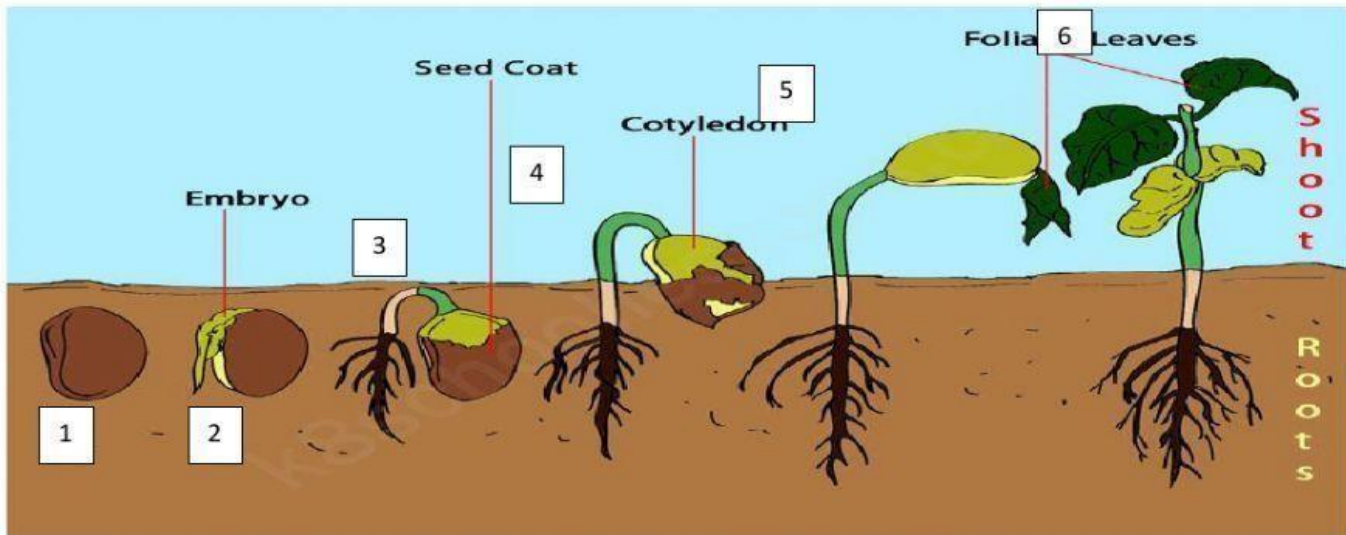
Drop some \_\_\_\_\_  into the \_\_\_\_\_ 

Cover the \_\_\_\_\_  with \_\_\_\_\_ 

Pour \_\_\_\_\_  into the \_\_\_\_\_ 

Give your \_\_\_\_\_  lots of \_\_\_\_\_ 

Wait for your new \_\_\_\_\_  to grow!



Fill in the missing words from the help box.

germinate seed coat cotyledons embryo radicle absorb plumule hairs  
shoot two smaller photosynthesis

**Step 1:** A seed has to get soil, air, water and the right temperature to \_\_\_\_\_.

Water is absorbed through a tiny hole in the seed. The seed becomes bigger in size and softer. The \_\_\_\_\_ cracks. This allows air to enter. Water helps to dissolve the nutrients in the \_\_\_\_\_ (seed leaves).

**Step 2:** The \_\_\_\_\_ (baby plant) inside the seed starts to grow and get bigger. It pushes open the seed coat, a bit like a chick hatching out of an egg! We say, the seed has **sprouted**. The \_\_\_\_\_ (tiny baby root) **begins to grow downward**.

**Step 3:** The radicle (baby root) gets bigger and gets many root hairs. It starts to \_\_\_\_\_ water and nutrients from the soil. The \_\_\_\_\_ (tiny baby shoot) **begins to grow upwards** towards the top.

**Step 4:** The root gets bigger and gets many root \_\_\_\_\_. It continues to absorb water and nutrients from the soil. The \_\_\_\_\_ comes out of the soil.













**Step 5:** \_\_\_\_\_ tiny leaves start to grow on the shoot.






**Step 6:** The root continues to grow downward and gets bigger and stronger. The cotyledons become \_\_\_\_\_ as the leaves become bigger. Soon the leaves start to make their own food ( \_\_\_\_\_ ) and the cotyledons fall off.

DRAG and DROP the pictures of the seeds into the correct DISPERSAL box.

## Seed Dispersal Sorting Activity

Cut out the squares and sort them into the correct page.

 <b>sycamore</b>	 <b>apple</b>	 <b>poppy</b>	 <b>peas</b>
 <b>horse chestnut</b>	 <b>dandelion</b>	 <b>coconut</b>	 <b>Himalayan balsam</b>
 <b>ragwort</b>	 <b>burdock</b>	 <b>berries</b>	 <b>acorn</b>

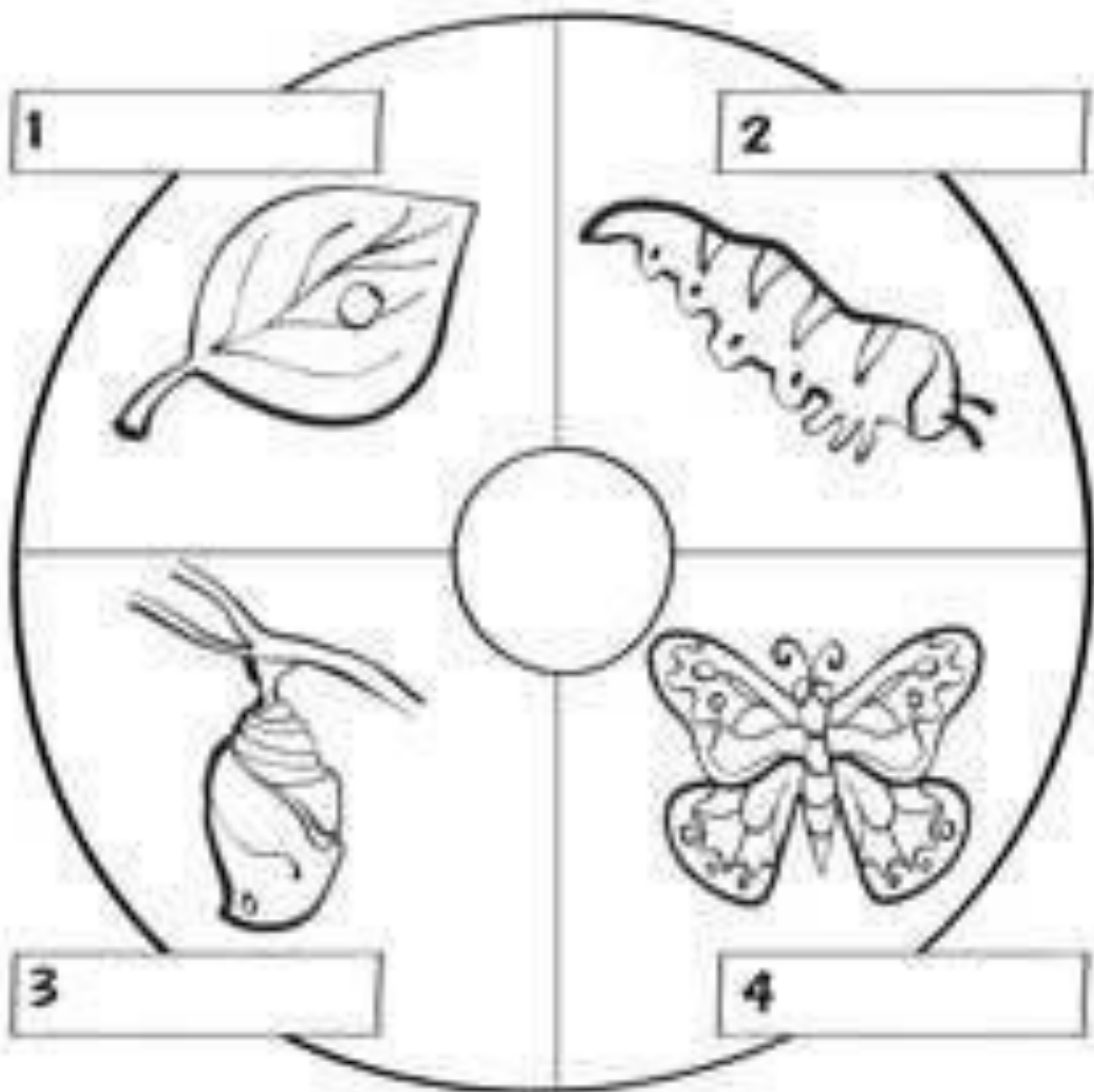
<b>Eaten by Animals</b>	<b>Catching a Lift</b>	<b>Wind</b>	<b>Water</b>	<b>Exploding</b>
 				





# Life cycle of a Butterfly

Color the life cycle stages below.



Name: \_\_\_\_\_

[www.cleverlearner.com](http://www.cleverlearner.com)

Cut out the stages of the butterfly life cycle and paste it on the correct picture

Caterpillar

Butterfly

Chrysalis

Egg

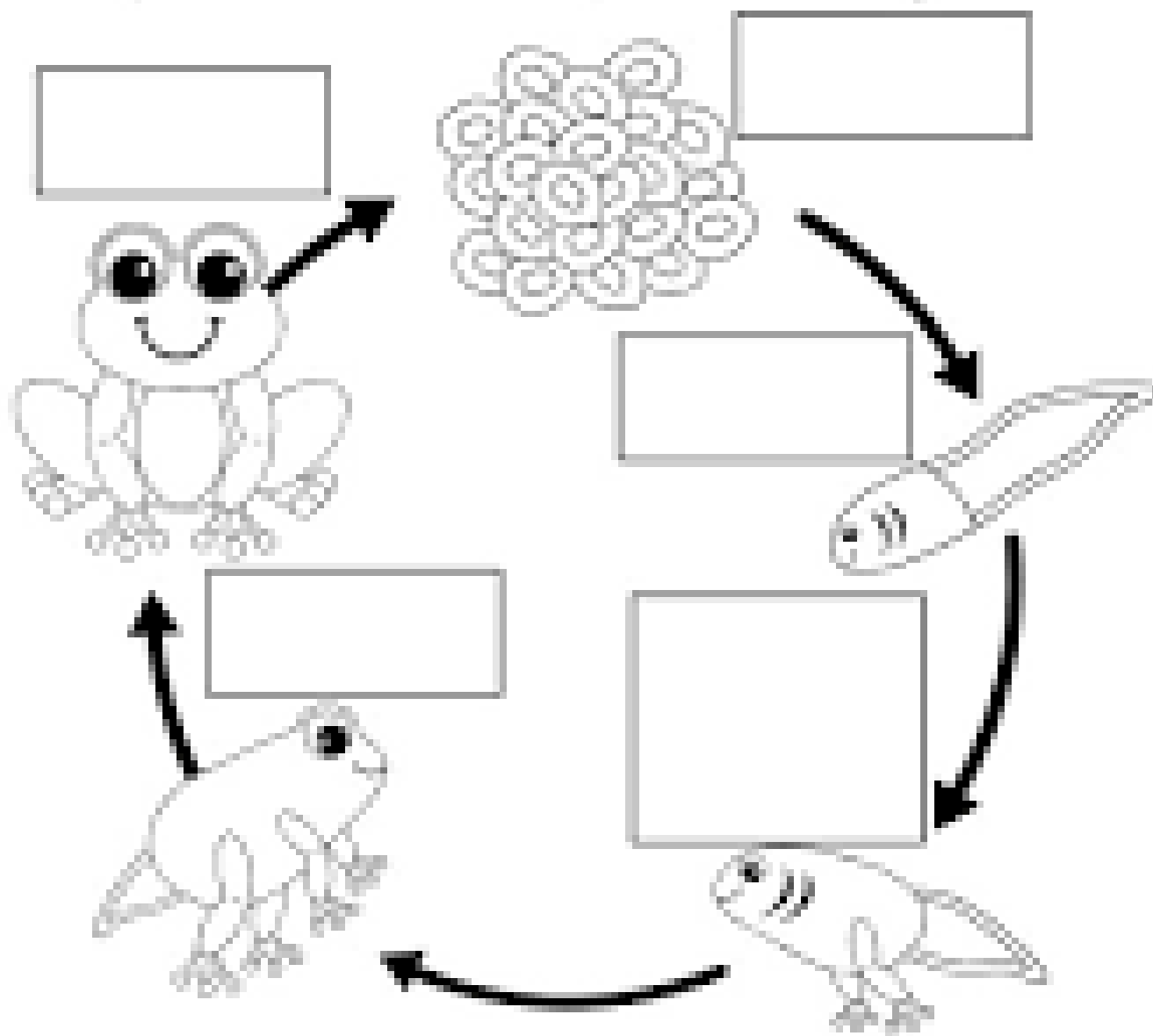
Names: \_\_\_\_\_



# Frog Life Cycle

Life Cycle by [www.funfonix.com](http://www.funfonix.com) © 2012

Cut and paste the words in the correct spots to label each stage.



frog

eggs

tadpole

tadpole

froglet

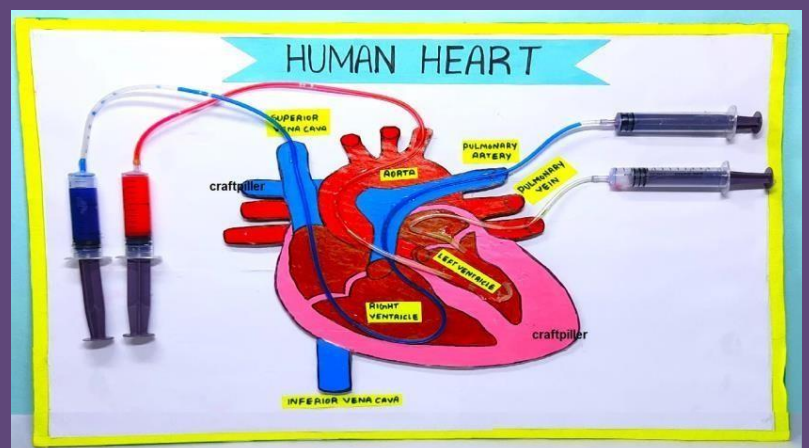
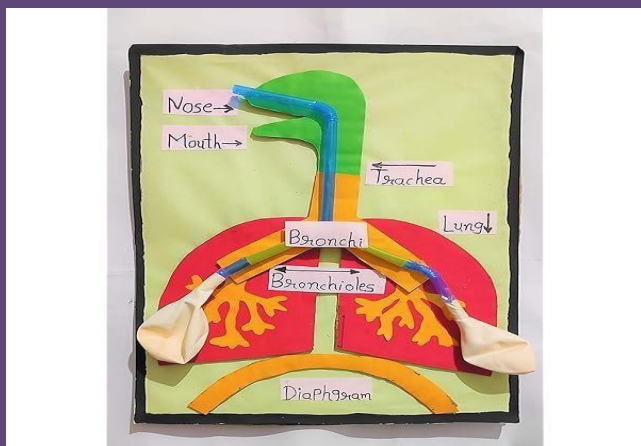
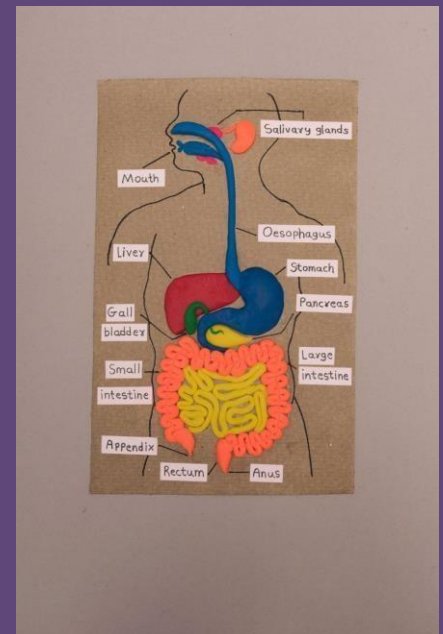

with hind

legs

MAKE A MODEL OF ANY OF THE FOLLOWING:

1. HUMAN SKELETAL SYSTEM
2. HUMAN DIGESTIVE SYSTEM
3. HUMAN RESPIRATORY SYSTEM
4. HUMAN EXCRETORY SYSTEM
5. HUMAN HEART

[TAKE IDEAS FROM THE FOLLOWING]



Have a great



VaCaTion!

GREEN LAND SR. SEC. PUBLIC SCHOOL

# MATHS

## Holiday Homework

Grade: V



## GREEN LAND SR. SEC. PUBLIC SCHOOL, LUDHIANA

SUBJECT- MATHS

WEEK- 1

ASSIGNMENT NO.1

### MENTAL MATHS

- 1)  $52,45,986 + \underline{\hspace{2cm}} = 52,45,986$       2)  $14,000 + \underline{\hspace{2cm}} = 26,000$   
3)  $42,319 + \underline{\hspace{2cm}} = 68,674 + 42,319$       4)  $7,425 + \underline{\hspace{2cm}} = 7,435$

### SUBJECTIVE TYPE QUESTIONS-

- 5) Add:  $93,675 + 9,432 + 1,456$       6) Find the sum of  $83,471 + 6,942 + 4,55,078$   
7) Arrange in columns and add :-  $62,12,786 + 1,50,842 + 2,754$   
8) Find the sum of largest 7-digit number and smallest 7-digit number.  
9) What number is 48,563 more than 56,248 ?  
10) Dodging tables :  
a)  $9 \times 8 = \underline{\hspace{2cm}}$       b)  $12 \times 5 = \underline{\hspace{2cm}}$       c)  $15 \times 7 = \underline{\hspace{2cm}}$   
d)  $6 \times 7 = \underline{\hspace{2cm}}$       e)  $14 \times 9 = \underline{\hspace{2cm}}$       f)  $16 \times 8 = \underline{\hspace{2cm}}$   
g)  $13 \times 3 = \underline{\hspace{2cm}}$       h)  $18 \times 2 = \underline{\hspace{2cm}}$       i)  $17 \times 4 = \underline{\hspace{2cm}}$

SUBJECT -MATHS

WEEK -1

ASSIGNMENT NO.2

### MENTAL MATHS

- 1)  $78,39,195 - \underline{\hspace{2cm}} = 45,32,195$       2)  $53,651 - 0 = \underline{\hspace{2cm}}$   
3)  $23,903 - 23,903 = \underline{\hspace{2cm}}$       4) The predecessor of smallest 8- digit number is  $\underline{\hspace{2cm}}$   
5)  $7,826 - \underline{\hspace{2cm}} = 7,526$

### SUBJECTIVE TYPE QUESTIONS

- 6) Subtract :  $7,36,792 - 3,12,058$   
7) Find the difference of 92,56,165 and 44,56,839.  
8) What is the difference between smallest 7-digit number and greatest 6-digit number?  
9) What must be added to 29,564 to get 93,608 ?  
10) Dodging tables:-  
a)  $14 \times 7 = \underline{\hspace{2cm}}$       b)  $18 \times 4 = \underline{\hspace{2cm}}$       c)  $9 \times 6 = \underline{\hspace{2cm}}$   
d)  $16 \times 2 = \underline{\hspace{2cm}}$       e)  $13 \times 5 = \underline{\hspace{2cm}}$       f)  $12 \times 8 = \underline{\hspace{2cm}}$

**SUBJECT – MATHS****WEEK - 1****ASSIGNMENT NO.3****Q1.Fill in the blanks :**

a.  $615 \times 0 = \underline{\hspace{2cm}}$

b.  $221 \times 1 = \underline{\hspace{2cm}}$

c.  $32 \times 100 = \underline{\hspace{2cm}}$

d.  $3400 \times \underline{\hspace{2cm}} = 340000$

e.  $\underline{\hspace{2cm}} \times 1 = 934$

**Q2. Multiply :**

a.  $72689 \times 7$

b.  $126120 \times 54$

c.  $234 \times 906$

Q3. The cost of one school bag is ₹ 575 . What will be the cost of 25 such bags ?

Q4. One story-book has 275 pages . How many pages are there in 68 such books?

Q5. Dodging tables :

a.  $14 \times 6 = \underline{\hspace{2cm}}$

b.  $19 \times 7 = \underline{\hspace{2cm}}$

c.  $18 \times 7 = \underline{\hspace{2cm}}$

d.  $16 \times 9 = \underline{\hspace{2cm}}$

Q6. If any number is multiplied with one ,then the product will be                     .

Q7.If any number is multiplied by 0 , then the product is always                     .

Q8. A shelf can hold 22,634 books. How many books can 25 such shelves hold ?

Q9. Multiply the greatest 5- digit number and the smallest 4 -digit number.

Q10 There are 208 mangoes in a box. How many mangoes will be there in such 1990 boxes?

**SUBJECT -MATHS****WEEK - 1****ASSIGNMENT NO.4****Q1. Fill in the blanks :**

a.  $23 \div 23 = \underline{\hspace{2cm}}$

b.  $300 \div 1 = \underline{\hspace{2cm}}$

c.  $45 \div 5 = \underline{\hspace{2cm}}$

Q2. Divide : a. 121022 by 11

b. 65596 by 31 and check your answer by the rule

Dividend = Divisor x quotient + remainder

Q3. Find the quotient and remainder : a. Divide 75678 by 34

b. Divide 54356 by 21

Q4. A shopkeeper has 36540 toys. He sells 15 toys daily. How many days does he need to sell his all toys?

Q5. Dodging tables :

a.  $17 \times 5 = \underline{\hspace{2cm}}$

b.  $18 \times 4 = \underline{\hspace{2cm}}$

c.  $18 \times 6 = \underline{\hspace{2cm}}$

d.  $15 \times 6 = \underline{\hspace{2cm}}$

e.  $17 \times 8 = \underline{\hspace{2cm}}$

f.  $17 \times 7 = \underline{\hspace{2cm}}$

Q6.a)  $120 \div \underline{\hspace{2cm}} = 15$

b)  $4600 \div 10 = \underline{\hspace{2cm}}$

c)  $642 \div \underline{\hspace{2cm}} = 642$

Q7.The number that is divided is called                     .

Q8. Divide the smallest 6 digit number by the smallest 3 digit number.

Q9.Find quotient and remainder :  $5,136 \div 12$

Q10.Misha has 3550 stickers and she wants to distribute it equally among 5 children .How many stickers will each child get?

**SUBJECT- MATHS****WEEK- 1****ASSIGNMENT NO.5****CHOOSE THE CORRECT OPTION :**

Q1. The place value of 4 in the number 45,56,878 is –

(a) Forty lakh

(b) Ten thousand

(c) forty thousand

(d) six thousand

Q2. 20 million =..... Crore.

(a) 20

(b)2

(c) 200

(d)2000

Q3. 10 crore =..... million.

a)100

(b) 10

(c) 1

(d)1000

Q4. The difference of greatest 8- digit number and smallest 6- digit number is .....

Q5. The successor of 9999999 is .....

Q6. The difference between place value of 3 and 5 in the number 12,34,56,789 is.                     .

- Q7. Rewrite the number name of 567892123 using commas in Indian number system.  
Q8. Write the number name of the 745321984 using commas in the International number system

**SUBJECT- MATHS**

**WEEK- 2**

**ASSIGNMENT NO.1**

1. Round off 42 to the nearest tens place.
2. Round off 876 to the nearest hundreds place.
3. Round off 348 to the nearest tens place.
4. Round off 6542 to the nearest hundreds.
5. Round off 85621 to the nearest hundreds.
6. Round off 6259 to the nearest thousands.
7. Round off 4647 to the nearest thousands.
8. Round off  $3424 + 1234$  to the nearest thousands.
9. Estimate  $237 + 780$  to the nearest Hundreds.
10. Dodging tables: a)  $9 \times 8 = \underline{\quad}$       b)  $16 \times 5 = \underline{\quad}$       c)  $18 \times 7 = \underline{\quad}$   
d)  $14 \times 9 = \underline{\quad}$       e)  $13 \times 3 = \underline{\quad}$       f)  $17 \times 6 = \underline{\quad}$

**SUBJECT -MATHS**

**WEEK -2**

**ASSIGNMENT NO.2**

- Q1.Put the sign (< ,> or = )  
a. $56,89,459 \underline{\quad} 59,78,478$       b. $90,78,897 \underline{\quad} 90,78,999$   
c. $4,56,200 \underline{\quad} 4,56,200$       d. $67,89,500 \underline{\quad} 6,65,89,500$

- Q2.Arrange in ascending order:  
 $56,97,910$ ;  $1,56,97,910$  ;  $5,00,011$  ;  $56,72,910$

- Q3Arrange in descending order :  
 $51,45,678$  ;  $51,54,678$  ;  $51,35,678$  ;  $51,55,678$

- Q4.Form the greatest and smallest numbers by using the given digits only once .  
a. $6,7,2,0,4,3$       b. $1,8,5,3,7$

- Q5. Find the successor of the following:  
a. $2,34,560$       b. $17,56,999$

- Q6. Find the predecessor of the following:  
a. $9,86,450$       b. $18,60,000$

- Q7. Find the difference of  $2,78,165$  and  $46,239$ .

- Q8. The sum of two numbers is  $45,26,841$ .If one number is  $6,18,037$ . Find the other number.

- Q9.Write in expanded form:      a)  $345,908$       b)  $12,340,865$

- Q10. Write the greatest 8-digit number according to Indian Number System.

**SUBJECT – MATHS**

**WEEK -2**

**ASSIGNMENT NO.3**

- Q1. Fill in the blanks:  
a.  $66 \div 6 = \underline{\quad}$       b.  $80 \div 4 = \underline{\quad}$       c.  $50 \div 10 = \underline{\quad}$

- Q2. Divide  $62525$  by  $25$  .

- Q3. The number that is divided is called          .

- Q4. Divide: a.  $1,25,250$  by  $20$       b.  $24480$  by  $160$

- Q5.My grandfather divided Rs.  $72,00,000$  equally among  $4$  brothers – sisters. How much will each get?



Q6. Lata works in a restaurant and earns Rs. 1,90,475 in 5 months. How much does Lata earn monthly?

Q7. A bus has a seating capacity for 58 students. How many students will travel in 16 such buses of the same capacity?

Q8. A box contains 276 apples. How many apples can be packed in 175 such boxes?

Q9. Dodging Tables: a.  $14 \times 9 = \underline{\quad}$       b.  $14 \times 8 = \underline{\quad}$       c.  $15 \times 7 = \underline{\quad}$   
d.  $12 \times 6 = \underline{\quad}$       e.  $13 \times 6 = \underline{\quad}$

## SUBJECT - MATHS

## WEEK - 2

## ASSIGNMENT NO. 4

Q. Three farms in a village have reported their annual crop yields. First farm produced 654,321 kg of crop, second farm produced 567,890 kg of crop and third farm produced 789,654 kg of crop.

Based on the given information answer the following questions:

- Which farm had the highest crop yield?
- Make Indian place value chart and write the given numbers in it.
- Arrange the given numbers in ascending order.
- What number will be formed if we change digits present at tens and thousands place in the number 654321?

Q. The estimated population of some cities of Uttar Pradesh are given below. Read the information and answer the following questions:

CITY	POPULATION
1. Noida	7,70,857
2. Greater Noida	1,29,211
3. Jhijnjhak	28,832
4. Aligarh	9,59,832
5. Fatehpur sikri	39,486
6. Hathras	1,65,010
7. Kalpi	62,004
8. Mathura	4,19,203
9. Hardoi	2,36,434
10. Etawah	3,08,205

- Arrange the population of cities in decreasing /descending order.
- Write the population of cities in both in Indian and International system of numeration.
- Which is the most populated and which is the least populated city?
- Write the expanded form of all the cities.

Q. Given below are the land areas of seven largest countries of the world. study the list and answer the following questions.

COUNTRY	AREA IN SQ.KM
India	32,87,590
Australia	76,86,850
Brazil	85,11,965
Argentina	27,66,890
Kazakistan	27,17,300
Sudan	25,05,810
United States of America	96,29,091

- Rewrite the list in order of largest to smallest land area.
- Which is the smallest country?
- Write the area of India in words.
- Which is the largest country in the list?
- Write the area of Australia in words using the international system of numeration.

Q. The "Galaxy Toy Factory" has been experiencing tremendous success in producing and selling toys. In January, the factory sold 2,354 toys. In February, the factory witnessed a remarkable increase in sales, selling 8,976 toys. The momentum continued in March, where the factory sold an astonishing 36,412 toys. April marked a special event, and the factory managed to sell an incredible 75,000 toys. As the year progressed, the factory had a successful October, selling 258,601 toys.

Based on the given information answer the following questions:

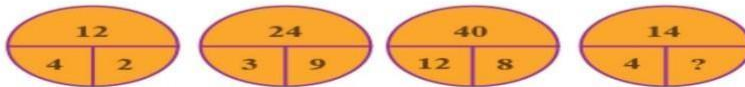
- In which month there was maximum sale of the toys?
- The expanded form of the number of toys sold in the month of March.
- Make Indian place value chart and write the given numbers in it.
- Write the place value and face value of digit '8' in the number of toys sold in the month of February.
- Arrange the given numbers in descending order.

Solve the given puzzle :-

By looking at the first three circles, identify a pattern or relationship that is the same in all four circles?

This pattern or relationship will help you determine the missing number in the last circle.

What is that number?



Q1.Fill in the blanks :

a.1 lakh = \_\_\_\_ thousands.

b. 10 lakhs = \_\_\_\_ million.

c.1 crore = \_\_\_\_ millions.

d. 10 crores = \_\_\_\_ millions.

Q2. Find the difference of the place value and the face value of the digit 4 in 9742350.

Q3.What will be the successor of largest 5 digit number ?

Q4. What will be the predecessor of the smallest 4 digit number ?

Q5.What is the sum of largest 5-digit number and the smallest 7 digit number ?

Q6.Complete the series : 84,904 ; 84,909 ; \_\_\_\_\_; \_\_\_\_\_; \_\_\_\_\_.

Q7. Which is greater ? a.1,45,56,786 or 1,45,56,876 b.5,67,970 or 5,67,967

Q8. Write in standard form . 40,00,00,000 + 7,00,00,000 + 60,00,000 +1,00,000 + 40,000 + 3,000 + + 500 + 8

Q9. Write the number names as numerals:

a. Six lakh fifty four thousand one hundred two.

b. Twenty three million four hundred thirty two thousand four hundred one.

Q10.Dodging tables:

a.5x6=\_\_\_\_\_

b. 7x9=\_\_\_\_\_

c.15x6=\_\_\_\_\_

d. 16x8=\_\_\_\_\_

Q1. Fill in the blanks:

a. Ascending order means \_\_\_\_\_ order of given numbers.

b. Descending order means \_\_\_\_\_ order of given numbers.

c. Numerals used by Romans are called \_\_\_\_\_.

d. There are only \_\_\_\_\_ symbols in Roman Numerals.



## Math Crossword Puzzle

11	+		=	24		
				+		+
		10	+		=	22
			=		=	
			36		=	35

### 1. Write the first three multiples of the given numbers.

- (i) 4                      (ii) 7                      (iii) 13

### 2. Find the prime factor of 84.

### 3. Fill in the blanks:

- (i)  $3 \times 5 = 15$ . Here 3 and 5 are ..... of 15.  
(ii)  $6 \times 7 = 42$ . Here 42 is the ..... of 6 and 7.  
(iii) The numbers with only 2 factors are called .....numbers.  
(iv) The HCF of co-prime number is .....  
(v) A number can have.....multiples.  
(vi) LCM of two co-prime numbers is their .....  
(vii) HCF of two or more numbers always .....their LCM.

### 4. Find the HCF of the given numbers.

- (i) 15 and 20                      (ii) 24, 36 and 42

(iii) 36 and 170

(iv) 90, 108 and 126

5. Write the prime numbers between 11 and 30.

6. Find the common multiples of 2, 8 and 12.

7. Check the divisibility of given numbers.

(i) 86,190 by 3

(ii) 47,815 by 9

(iii) 2,37,405 by 2 (iv) 81,620 by 4

8. Dodging tables :a)  $19 \times 8 = \underline{\quad}$  b)  $14 \times 5 = \underline{\quad}$  c)  $11 \times 7 = \underline{\quad}$

### SUB -MATHS

### WEEK - 4

### ASSIGNMENT NO.2

Covert:

1) 60 minutes into hours

2) 160 minutes into hours

3) 93 minutes into hours

4) 18 months into year

5) 9 months into weeks

6) 27 months 10 days into days

**Addition:**

7) 28 minutes 30 seconds and 10 minutes 10 seconds

8) 46 minutes 34 seconds and 12 minutes 20 seconds

**Subtract**

9) 40 minutes 27 seconds and 27 minutes 17 seconds

10) 5 hours 29 minutes and 3 hours 16 minutes

### SUBJECT – MATHS

### WEEK -4

### ASSIGNMENT NO.3

1. The annual rent of a house is ₹ 3600. Find the rent of 5 months.

2. Ron earns ₹ 840 in a week. How much will he earn in 36 days?

3. The cost of 9 litres of petrol is ₹378. How much will 15 litres of petrol cost?

4. The salary of 12 workers is ₹3732. What will be the salary of 5 workers?

5. The cost of 8 kg of ghee is ₹ 904. What will be the cost of 14 kg of ghee?

6. A bicycle factory produces 1505 bicycles in a week. How many bicycles will it produce in 30 days?

7. Derek earns \$ 48000 in 3 months. What is his annual income?

Conversion of Roman numerals and Numbers.

Number	Roman Numeral	Number	Roman Numeral
	CDXIV	170	
	CDLXXII	329	
	CCCXVIII	485	
	CCCXLI	451	
	CCXXV	333	
	CCXCIV	248	
	CXXVI	132	
	CXCIII	46	
	CI	25	

Write the correct Roman numeral or the number.

- 1) LXX = \_\_\_\_\_      2) CXCVII = \_\_\_\_\_      3) 317 = \_\_\_\_\_  
 4) CLXXX = \_\_\_\_\_      5) 240 = \_\_\_\_\_      6) 460 = \_\_\_\_\_

- I am the number being divided. Who am I? [ IIDDVNED]
- I am the answer of a division sum. I am called the \_\_\_\_\_[TTOUEQNI]
- When a number doesn't divide another number exactly, I am left . I am the \_\_\_\_\_[ DRERIEMAN].
- If any number is multiplied by 0, then the product is always \_\_\_\_\_[ orze]
- The result of subtraction is called \_\_\_\_\_[FEFEDNIREC]

# Green Land Sen.Sec.Public School,Ludhiana

Holiday homework for art and craft

GRADE-5

## **TASKS:**

1. Complete page no.33,34,37,39,41,43,44 and 45 of drawing skill book.
2. Make Pen stand using the following ideas



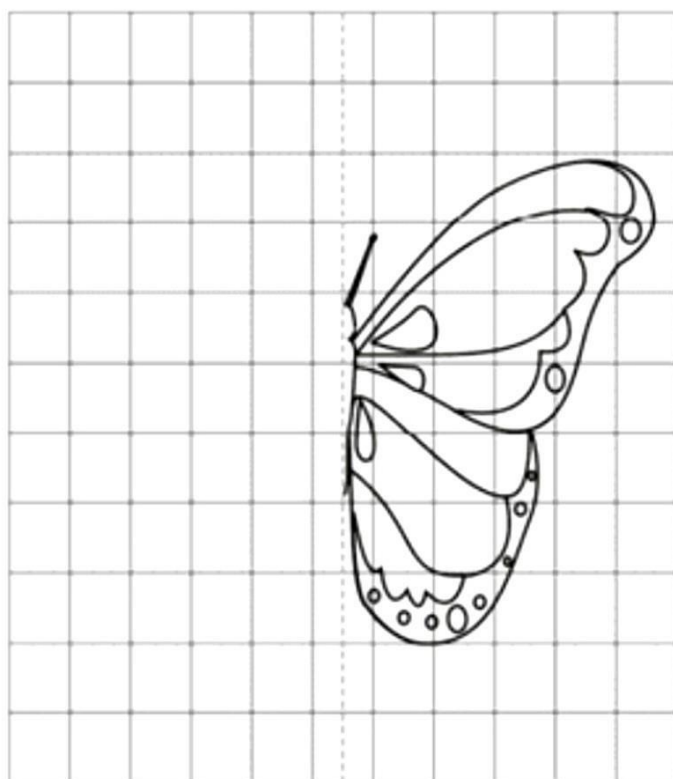


3. Use a grid to draw a mirror image of the butterfly's right side on the blank side of the axis and colour it

Name \_\_\_\_\_

### Mirror Image Drawing

Draw half symmetry of the picture.






4. Make a painting using watercolors on an A4 size sheet

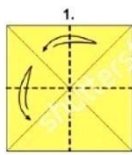
# How To Paint

## A Sunset Pier

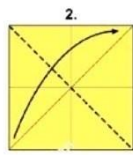


## 5. Make origami lily following the steps given below:

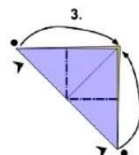
LILY



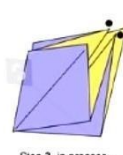
1.  
Fold and unfold.



2.



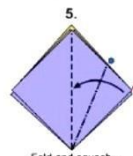
3.  
The corners to the inside.



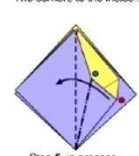
Step 3. in process..



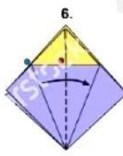
4.  
Fold and unfold.



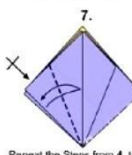
5.  
Fold and squish..



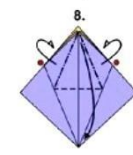
Step 5. in process..



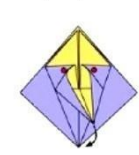
6.



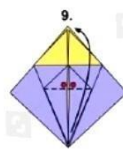
7.  
Repeat the Steps from 4. to 6.



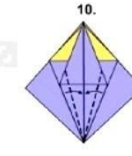
8.  
Fold the tip down..



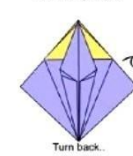
Step 8. in process..



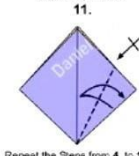
9.



10.



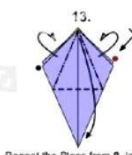
11.  
Turn back..



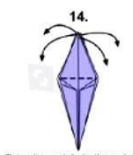
Repeat the Steps from 4. to 10.



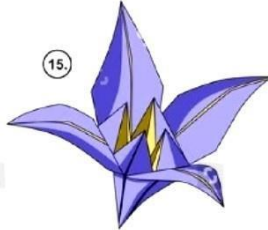
12.



13.  
Repeat the Steps from 8. to 10.  
in the both sides..



14.  
Open the petals to the outside..














15.

GREEN LAND SR. SEC. PUBLIC SCHOOL, LDH  
HOLIDAYS HOMEWORK  
SUBJECT- COMPUTER  
CLASS- V

**Q1. Match the keyboard shortcut to its meaning.**










Ctrl + H	Bold text
Ctrl + Z	Print
Ctrl + Y	Open
Ctrl + B	Close tab
Ctrl + O	Undo
Ctrl + P	Find and replace
Ctrl + W	New tab
Ctrl + T	Redo

**Q2. Name the icons of the applications used in the computer.**






			
<input type="text"/>	<input type="text"/>	<input type="text"/>	<input type="text"/>
			
<input type="text"/>	<input type="text"/>	<input type="text"/>	<input type="text"/>
			
<input type="text"/>	<input type="text"/>	<input type="text"/>	

Internet browser    Snapchat    Instagram    Youtube  
 Facebook    Powerpoint    Folder    Publisher    Excel  
 Word    Recycle bin

**Q3. Match the keyboard shortcut to its meaning.**

Ctrl + C	Copy 
F5	Print 
Ctrl + V	Cut 
Ctrl + Z	Open 
Ctrl + X	Help 
F1	Refresh 
Ctrl + O	Repeat Typing 
Ctrl + Y	Undo 
Ctrl + P	Paste 

**Q4. Name the parts of the computer.**

		
<input type="text"/>	<input type="text"/>	
		
<input type="text"/>	<input type="text"/>	<input type="text"/>

Hard disk

Motherboard

Power supply

RAM

Microprocessor

Moral Science Activity

Unscramble the jumbled words and write them in the blank space provided.

1. Greedy person is never \_\_\_\_\_. (NTEDOCNET)
2. \_\_\_\_\_ was one of the richest king in the world. (ADIMS)
3. The Angel granted the king a \_\_\_\_\_ of golden touch. (ONOB)
4. Midas became \_\_\_\_\_ as he was starving. (SIREMBLAE)
5. He realized his \_\_\_\_\_. (LOFLY)
6. The King asked the angel to \_\_\_\_\_ him. (GVEIORF)
7. Greediness is a \_\_\_\_\_. (RUCES)
8. Contentment is a real source of \_\_\_\_\_. (HSUPNAINPES)
9. His daughter became a \_\_\_\_\_ of gold. (TAUEST)
10. He promised to share his \_\_\_\_\_ ( LAEWHT) with the poor and needy.

Page  
6 to 7

**GREEN LAND SR. SEC PUBLIC SCHOOL, LUDHIANA**

**Let's learn some Moral & Ethical Values.**

**" We are all born as empty vessels which can be shaped by Moral Values."**

- ★ Wake up early in the morning.
- ★ Wash your hands before and after eating.
- ★ Chew your food properly.
- ★ Wish Good morning and Good night to everyone.
- ★ Respect everyone.
- ★ Never hurt anyone.
- ★ Be helpful.
- ★ Be patient.
- ★ Forgive others.
- ★ Be honest.
- ★ Share with others.
- ★ Keep your things at their proper places.
- ★ Keep your surroundings clean.
- ★ Do not argue with others.
- ★ Say thank you and please.
- ★ Admit your mistakes.
- ★ Respect all religions.
- ★ Complete your work on time.
- ★ Never give up.
- ★ Always speak the truth.



GK  
Homework

**GREEN LAND SR. SEC . PUBLIC SCHOOL , LUDHIANA**

**SESSION : 2024 -2025**

**Let's increase our General Knowledge**

**1. The word 'Punjab' is taken from which language?**

**Ans- Persian**

**2. Which is the state animal of Punjab?**

**Ans – Blackbuck**

**3. Which is the state bird of Punjab?**

**Ans-Northern Goshawk ( Baaz)**

**4.Which is the state tree of Punjab?**

**Ans- Sheesham**

**5. ISRO's Flight Test Vehicle Abort Mission-1 (TV-D1) is a crucial test for which mission?**

**Ans- Gaganyaan**

**6. Who became the first Indian cricketer to score 12,000 T20 runs?**

**Ans- Virat Kohli**

**7. Which state has recently become the first state to map all 784 accident – prone sites using the Mappls App for road safety?**

**Ans – Punjab**

**8. Which Indian cricketer scored the fastest century in the ODI World Cup, in 62 balls?**

**Ans- K.L. Rahul**

**9. India's first water metro was recently inaugurated in which state?**

**Ans- Kerala**

**10. What is the name of the satellite recently launched by NASA to survey oceans and atmosphere?**

**Ans- PACE**

**11 . In which city was North India's first 'Pizza ATM' introduced?**

**Ans- Chandigarh**

**12. Which city is set to receive India's first driverless metro train?**

**Ans- Bengaluru**

**13. In which Indian state was 'Iris', the first generative AI teacher,introduced in a school ?**

**Ans- Kerala**

**14. Which is the first Indian state to ban plastic bags?**

**Ans- Sikkim**

**15. When is India planning to establish its own space station?**

**Ans-2035**

**16. What is the name of the ChatGPT- style service which is recently launched by the Reliance Industries group?**

**Ans- Hanooman**

**17 . Which communication satellite is set for launch in the historic collaboration between ISRO and SpaceX?**

**Ans-GSAT-20**

**18. Which institution developed an 'ocean Wave Energy Converter' that can generate electricity from sea waves?**

**Ans- IIT Madras**

**19. Who becomes the first Indian to venture into space as a tourist on the NS-25 mission of Blue origin?**

**Ans- Gopi Thotakura**

**20. Which country recently launched the Chang'e 6 probe to bring back soil from the dark side of the moon?**

**Ans- China**