



GREEN LAND SR. SEC. PUBLIC SCHOOL, LDH
HOLIDAY HOMEWORK
CLASS-VI

Dear Parents and Students

As we embark on the summer vacation, I want to remind you of the importance of continued learning and growth during this time away from school. To ensure that our students remain engaged and academically stimulated, we have assigned summer vacation homework for all classes. This homework is designed to reinforce concepts learned throughout the year and to prepare students for the upcoming academic term. I urge all students to approach their summer homework with diligence and responsibility. Completing these assignments will not only enhance your academic skills but also help you start the new school year on the right foot. Parents, your support in encouraging your children to complete their summer homework is invaluable. By working together, we can ensure that our students continue to thrive academically.

If you have any question or concern regarding the summer vacation homework, please do not hesitate to reach out to your child's teachers .

Wishing everyone a productive and enjoyable summer break!

Principal



GREEN LAND SR. SEC. PUBLIC SCHOOL

Art Integrated Project

Class 6th Bacon , Chaucer, Keats, Milton

1. To find H.C.F and L.C.M using pasting strips on A3 size sheet.(Roll no. (1 to 5) .
2. Prepare a working model of expanded form.(Roll no.6 to 10)
3. Prepare a working model of place value table. (Roll no. 11 to 15)
4. Make a chart on factors tree of number of your choice. (Roll no. 16 to 20)
5. Prepare a beautiful chart of divisibility test of 2, 3 and 4 (Roll no. 21 to 25)
6. Prepare a beautiful chart of divisibility test of 5,6 and 8 (Roll no.26 to 30)
7. Prepare a beautiful chart of divisibility test of 9 ,10 and 11 (Roll no.31 to 35)
8. Collect information on any one of the famous mathematician. Write it on A3 sheet.
 - a. Aryabhatta
 - b. Bhaskara
 - c. Shri Niwasan Ramanujan.(Roll no. 36 to 40)
9. Prepare 10 flash cards using thick colour sheet or cardboard.(Roll no. 41 and 42)

Green Land Sr. Sec. Public School, Ludhiana

Class: VI Subject: English

Holidays Homework

Assignment No. 4 (Reading)

Name : _____ Class : _____ Roll no. _____

1. Read any good book and write its review on A4 sheet.(Compulsory Homework)

2. Solve one page of My Learning Port daily.

3. Three Assignments as Holidays Homework.

Q1. Read the following passage carefully :

Social networking sites have become an integral part of modern life, allowing people to connect with friends, family, and colleagues, regardless of geographic location. These platforms provide a space for sharing updates, photos, and memories, fostering a sense of community among users. However, the rise of social media has also raised concerns about privacy, cyberbullying, and the impact on mental health.

While social networking sites offer many benefits, such as facilitating communication and networking, they also pose risks. Privacy breaches are a common concern, as personal information shared online can be accessed by third parties without consent. Moreover, cyberbullying has emerged as a significant issue, with users facing harassment and intimidation on these platforms.

The drawbacks of social networking sites is their potential negative impact on mental health. Excessive use of social media has been linked to feelings of loneliness, depression, and anxiety, as users may compare their lives to others highlight reels. Moreover, the constant stream of notifications and updates can lead to addiction-like behaviour, with users feeling the need to constantly check their profiles.

Despite these challenges, social networking sites continue to evolve, with efforts being made to address concerns around privacy and mental health. Features such as privacy settings and reporting tools aim to empower users to control their online experience and address harmful behaviour. Additionally, initiatives promoting digital literacy and online safety seek to educate users about responsible social media usage.

On the basis of your reading of the passage, answer the following questions briefly :

1. What role do social networking sites play in modern life according to the passage?

- A) They hinder communication
- B) They promote loneliness
- C) They facilitate connection regardless of geographic location
- D) They encourage isolation

2. What are some activities facilitated by social networking sites mentioned in the passage?
 - A) Playing video games
 - B) Sharing updates, photos, and memories
 - C) Cooking recipes
 - D) Reading books
3. What concerns are raised about privacy on social networking sites?
 - A) Users have complete control over their personal information
 - B) Personal information can be accessed by third parties without consent
 - C) Privacy settings are non-existent
 - D) There are no risks associated with sharing personal information online
4. What is cyberbullying, according to the passage?
 - A) Complimenting others online
 - B) Positive interactions on social media
 - C) Harassment and intimidation on social media platforms
 - D) Sharing helpful information online
5. What negative impact is associated with excessive use of social media on mental health?
 - A) Increased feelings of happiness and fulfillment
 - B) Feelings of loneliness, depression, and anxiety
 - C) Improved self-esteem and confidence
 - D) Reduced stress levels
6. How do social networking sites evolve to address concerns raised in the passage?
 - A) They ignore user concerns
 - B) They remove all privacy settings
 - C) They introduce features such as privacy settings and reporting tools
 - D) They increase the number of notifications and updates
7. What is the purpose of initiatives promoting digital literacy and online safety mentioned in the passage?
 - A) To encourage addiction to social media
 - B) To educate users about responsible social media usage
 - C) To increase privacy breaches
 - D) To promote cyberbullying
8. What is the author's attitude towards the evolution of social networking sites to address concerns raised in the passage?
 - A) Supportive
 - B) Critical
 - C) Indifferent
 - D) Ambivalent

Name : _____ Class : _____ Roll. No. : _____

Q1. Do as directed :

A. Nouns:

1. Identify the noun in the sentence: "The sun shines brightly in the sky."

Ans : _____

2. Find the proper nouns in the sentence: "Sara and Tom went to Paris for their vacation."

Ans : _____

3. Write a sentence using a collective noun.

Ans : _____

4. Identify the abstract noun in this sentence: "Honesty is the best policy."

Ans : _____

5. Identify the abstract noun in this sentence: "Courage is the key to success."

Ans : _____

B. Pronouns:

6. Replace the underlined noun with a pronoun: "Jane and Lisa went to the store to buy groceries."

Ans : _____

7. Identify the personal pronouns in the sentence: "He loves to read books in his free time."

Ans : _____

8. Rewrite the sentence using an indefinite pronoun: "Everybody enjoyed the party."

Ans : _____

9. Rewrite the sentence using a possessive pronoun: "The book belongs to Sarah."

Ans : _____

10. Fill in the blanks with the correct pronouns:

a) Sarah and _____ went to a movie last night.

b) The cat chase _____ tail around the room.

C. Verbs:

11. Change the verb in the past tense: "She sings beautifully."

12. Choose the correct form of the verb to complete each sentence:

a) She _____ (sing/sang/sung) beautifully.

b) We _____ (go/went/gone) to the park every Sunday.

c) The children _____ (play/played/playing) in the yard yesterday.

13. Identify the linking verb in this sentence: "The flowers smell fragrant."

Ans : _____

14. Rewrite the sentence using a modal verb: "He can swim across the lake."

Ans : _____

D. Adjectives:

15. Identify the adjectives in the sentence: "The big, fluffy dog barked loudly."

16. Fill in the blanks with the appropriate adjectives:

a) The _____ cat slept peacefully on the windowsill.

b) He bought a _____ car yesterday.

17. Identify the superlative adjective in this sentence: "She is the tallest girl in the class."

18. Rewrite the sentence using a possessive adjective: "The book belongs to Peter."

E. Sentences:

19. Change the sentence to a compound sentence: "I like pizza. My sister prefers pasta."

20. Identify the complex sentence in this group: "He studied hard because he wanted to pass the exam."

21. Rewrite the sentence as an imperative sentence: "Please, close the window."

22. Change the sentence to an exclamatory sentence: "The fireworks display was spectacular."

F. Rearrange the following jumbled words into meaningful sentences

23. populated/the/country/largest/India/in/the/second/world

Ans : _____

24. rolling/gathers/a/stone/moss/no

Ans : _____

25. value/Tulsi/medicinal/a/great/have/leaves

Ans : _____

Green Land Sr. Sec. Public School, Ludhiana

Class: VI Subject: English

Holidays Homework

Assignment No. 6 (Literature)

Chapter : The Selfish Giant

Name : _____ **Class :** _____ **Roll no. :** _____

Q1. Read the extract and answer the questions that follow :

The Giant's heart melted as he looked out. 'How selfish I have been!' he said; Now I know why the Spring would not come here. I will put that poor little boy on the top of the tree, and then I will knock down the wall, and my garden shall be the children's playground for ever and ever. He was really very sorry for what he had done.

1. What realization does the Giant come to in the passage?

- a. He discovers the secret to making his garden bloom.
- b. He realizes he needs to build a higher wall around his garden.
- c. He understands the reason why spring wouldn't come to his garden.
- d. He decides to keep the garden all to himself forever.

2. Why does the Giant's heart melt in the passage?

- a. He sees the children playing in his garden.
- b. He feels the warmth of the sun.
- c. He hears laughter coming from outside.
- d. He realizes he has been selfish.

3. What does the Giant decides to do after realizing his mistake?

- a. Build a higher wall around his garden.
- b. Plant more flowers in his garden.
- c. Allow the children to play in his garden.
- d. Keep the garden all to himself forever.

4. What was the consequence of the Giant's selfishness in the garden?

- a. The trees withered away.
- b. Winter persisted while spring came everywhere else.
- c. Flowers bloomed abundantly.
- d. The children stayed away from the garden.

Q2. Answer the following questions in 20-30 words.

1. How did the Giant celebrate the coming of the Spring?

Ans : _____

2. Why was it still Winter in one corner of the garden ?

Ans : _____

3. How did the other children react when they saw that the Giant was not wicked anymore?

Ans : _____

Poem – A Roti's Grudge

Q 1. Read the extract and answer the questions that follow:

I never get a second glance
Hear 'yummy' on an off chance
Yet, there I sit in every plate
Round and ready to meet my fate

Q1. Who does not gets a second chance ?

Ans : _____

Q2. What is fate of Roti as discussed in the above passage?

Ans : _____

Q3. What is tone of roti in the above passage?

Ans : _____

Q2. Read the extract and answer the questions that follow:

As I'm unceremoniously torn
Pinched into a scoop
A substitute for a spoon Dunked into lentil soup

Q1. What role do rotis play in the poem?

Ans : _____

Q2. What emotions are associated with rotis in the poem?

Ans : _____

Q3. How does the above passage create sense of humour in the poem?

Ans : _____

Q3. Tick the correct answers :

1. What is the central theme of the poem "A Roti's Grudge"?

- | | |
|--|------------------------------------|
| a. The importance of food in our lives | b. The emotions of an ignored roti |
| c. The significance of family bonds | d. The joys of cooking together |

2. What does the roti feel towards the end of the poem?

- | | | | |
|--------------|------------|----------|--------------|
| a. Happiness | b. Sadness | c. Anger | d. Gratitude |
|--------------|------------|----------|--------------|

3. Who is the author of the poem "A Roti's Grudge"?

- | | | | |
|--------------|-------------------|--------------|-----------------|
| a. Rupi Kaur | b. Natasha Sharma | c. Lang Leav | d. Maya Angelou |
|--------------|-------------------|--------------|-----------------|

4. What literary device is used in the line "How can you leave me to die"?

- | | | | |
|-----------|-------------|--------------------|--------------|
| a. Simile | b. Metaphor | c. Personification | d. Hyperbole |
|-----------|-------------|--------------------|--------------|

GREEN LAND SR. SEC. PUBLIC SCHOOL

CLASS- VI

SUBJECT – MATHEMATICS

CH – 1 KNOWING OUR NUMBER

HOLIDAYS HOMEWORK

Q1. Choose the correct option:-

a. One million is equal to

a. one lakh b. 10 lakh c. 1 crore d. none of these

b. Largest 4- digit number using any one digit twice from 7, 5, 8 .

a. 8875 b. 8785 c. 7758 d. 5578

c. 10 lakhs = _____ million.

a. 10 b. 1 c. 2 d. 100

d. Largest 5 digit number using the digits 4,5,6,7,2 is

a. 24567 b. 25674 c. 76542 d. None of these

e. How many even numbers are there between 15 and 25.

a. 3 b. 2 c. 6 d. 5

Q2. Fill in the blanks:-

(i) 1 lakh = _____ thousands

(ii) 1 million = _____ lakhs

(iii) 1 crore = _____ millions

(iv) 2 kg = _____ g

(v) 1 litre = _____ millilitres

Q3. Place commas correctly and write in numerals:-

a) Forty million six hundred two thousand sixty four.

b) Eight million six thousand five.

c) Seventy eight million four hundred one.

d) Sixty nine lakh twenty three thousand two hundred seven.

e) Ninety nine million two hundred five.

Q4. Insert commas suitably and write the names according to Indian and

International system of Numeration:-

(i) 9087654

(ii) 67542876

(iii) 78964311

(iv) 5674323

(v) 203107

(vi) 5672904

Q5. 12 km 750 m distance was travelled in 30 days. Find the distance travelled in 1 day.

Q6. Nitin is a famous cricket player. He has so far scored 6980 runs in test matches. He wishes to complete 10,000 runs. How many more runs does he need?

Q7. Find the difference between the greatest 6- digit number and the smallest 5- digit number.

Q8. Simplify the following :-

a. 638×92

ii. 754×102

iii. 107×15

iv. 22×134

Q9. Arrange the following numbers in ascending order :-

84,290 ; 25,391 ; 6,575 ; 8,314 ; 43,192

Q10. Arrange the following numbers in descending order :-

67,896 ; 89,674 ; 7,897 ; 6,790 ; 87,987

GREEN LAND SR. SEC. PUBLIC SCHOOL

CLASS- VI

SUBJECT – MATHEMATICS

CH- 2 Whole Numbers

HOLIDAYS HOMEWORK

Q1. Multiple choice questions:-

a. The successor of the largest two digit number is _____,

- i. 99 ii. 98 iii. 100 iv. 10

b. The smallest even whole number is _____.

- i. 2 ii. 0 iii. 1 iv. None of these

c. The predecessor of 1 million is _____.

- i. 999,999 ii. 100,001 iii. 998,999 iv. 100,000

d. Every whole number except _____ has a predecessor.

- i. 1 ii. 0 iii. -1 iv. None of these

e. Successor of 1 lakh is _____.

- i. 99,999 ii. 1,001 iii. 998 iv. 100,001

f. The difference between the successor and the predecessor of 99999 is _____.

- i. 1 ii. 0 iii. 2 iv. -1

g. The difference between the place value and face value of 8 in 3,57,860 is _____.

- i. 808 ii. 800 iii. 792 iv. None of these

Q2. State whether True or False:-

- a. Zero is the smallest natural number.
- b. Zero is the smallest whole number.
- c. All whole numbers are natural number.
- d. The natural number 1 has no predecessor.
- e. 600 is the successor of 599.

f. The sum of two even numbers is an even number.

g. The whole number 13 lies between 11 and 12.

h. The whole number 0 has no predecessor.

Q3. Write the successor of :-

a) 34697 b) 708343 c) 489600 d) 56782

Q4. Write the predecessor of :-

a) 24860 b) 909523 c) 3296140 d) 89999

Q5. Write the six natural numbers before 8732101.

Q6. Write the three natural numbers after 84423.

Q7. Write the natural numbers between 67897 and 67901.

Q8. Represent $9-3$ on number line.

Q9. Represent $3+4$ on number line.

Q10. Represent 4×3 on number line .

GREEN LAND SR. SEC. PUBLIC SCHOOL
CLASS- VI SUBJECT – MATHEMATICS
CH – 3 PLAYING WITH NUMBERS
HOLIDAYS HOMEWORK

Q1. Fill in the blanks :-

- a. A _____ of a number is an exact divisor of that number.
- b. _____ is a factor of every number.
- c. The greatest prime number between 1 and 10 is _____.
- d. The number of multiples of a given number is _____.
- e. Number which are multiples of 2 are called _____ numbers.
- f. _____ is the smallest and the only even prime number.
- g. The sum of any two odd numbers is _____.
- h. _____ is neither prime nor composite.
- i. The smallest prime number is _____.
- j. Two consecutive odd prime numbers are known as _____.
- k. The sum of any two even number is _____.
- l. A set of three consecutive prime numbers differing by 2 is called a _____.
- m. A number is divisible by 6. If it is divisible by _____ and _____ both.
- n. H.C.F of two consecutive even number is _____.

o. A number is a multiple of each of its _____.

Q2. Write all the factors of the following numbers :-

a. 45 b. 100 c. 35 d. 125

Q3. Write first five multiples of :-

a. 40 b. 17 c. 45 d. 23

Q4. Write down separately the prime and composite numbers less than 35.

Q5. Write all prime numbers between 60 and 90 .

Q6. Find the common factor of 5, 15 and 25.

Q7. Find the three common multiples of 12 and 18.

Q8. Find the H.C.F by prime factorization method :-

a. 20 , 28 and 36 b. 70, 105 and 175

c. 12, 45 and 75 d. 52, 72 and 100

Q9. Find the H.C.F by long division method :-

a. 72, 144 and 252 b. 300, 324 and 372

c. 144, 180 and 192 d. 18, 54 and 81

Q10. Write first five natural numbers.

Q11. Write first five whole numbers.

Q12. Write first five even numbers.

Q13. Write first five odd numbers.

Q14. Write first five prime numbers.

Q15. Meenu purchases two bags of fertiliser of weights 75 kg and 69 kg. Find the maximum value of weight which can measure the weight of the fertiliser exact number of times.

Q16. The length, breadth and height of a room are 825 cm, 675 cm and 450 cm respectively. Find the longest tape which can measure the three dimensions of the room exactly.

GREEN LAND SR SEC PUBLIC SCHOOL

CLASS: VI SUB: SCIENCE ASSIGNMENT: 1 (Ch-1 and Ch-3)

HOLIDAYS HOMEWORK

Name: _____ **Class:** _____ **Section:** _____

Tick the correct answer:

- Which one of the following food item does not provide dietary fibre?
(a) Whole wheat (c) Milk
(b) Whole pulses (d) Fruits and vegetables
- Iodine is used to test the presence of _____:
(a) Proteins (c) Fats
(b) Vitamins (d) Starch
- Main function of roughage in our body is:
(a) To provide energy (c) To keep bones and teeth healthy
(b) Body building (d) To get rid of undigested food
- Which amongst the following methods would be the most appropriate to separate grains from the bundles of stalks?
(a) Handpicking (c) Sieving
(b) Winnowing (d) Threshing
- Which of the following statement is incorrect?
(a) Filtration is helpful in separating insoluble particles from a solution
(b) Sedimentation is the process of settling of heavier particles
(c) Sieving is the method where wheat flour can be separated from sand
(d) None of these

Fill in the blanks:

- Solubility of salt increases with _____ in temperature.
- _____ and _____ are used to separate lighter solids from heavier solids.
- The fibrous indigestible material present in our food is called _____.

True or false:

- Vitamin B complex helps in proper functioning of the digestive system.
- Beri – Beri is caused due to deficiency of vitamin C.
- The process of filtration can be used to separate seeds and pulp from fruit juices.

Answer the following questions:

- Define the following terms:
(a) Sublimation: _____
(b) Loading: _____
(c) Dehydration: _____
(d) Deficiency disease: _____

2. Provide one word answer:

(a) I help you grow and look healthy, I am found in meat, beans and dairy, who am I?

Ans: _____

(b) I am liquid transparent like water, I am not soluble in water. How would you separate me when I am in water?

Ans: _____

3. What is the effect of solubility of gases in water?

Ans: _____

4. Mention two sources of each starch and sugar.

Ans: _____

5. How is obesity caused?

Ans: _____

6. Mention the role of water in our body.

Ans: _____

7. Why do we call water a universal solvent?

Ans: _____

8. Which material other than a strainer and a filter paper can be used for filtration?

Ans: _____

9. Why do we need to separate substances from their mixture?

Ans: _____

10. Complete the following table:

| S. No. | Vitamins/Minerals | Source | Deficiency Disease |
|--------|-------------------|--------|--------------------|
| 1. | Vitamin A | | |
| 2. | Vitamin C | | |
| 3. | Vitamin D | | |
| 4. | Iron | | |
| 5. | Calcium | | |

ASSERTION- REASON BASED QUESTIONS

In the following questions, two statements are given- one labelled Assertion(A) and the other labelled Reason(R). Select the correct answers to these questions from the codes (a),(b),(c) and (d) as given below.

- (a) Both A and R are true and R is the correct explanation of the assertion.
- (b) Both A and R are true but R is not the correct explanation of the assertion
- (c) A is true but R is false.
- (d) A is false but R is true.

1. Assertion: Fats are energy giving foods.

Reason: If we eat more fats, we get more energy.

Ans. _____

2. Assertion: Air is a compound.

Reason: Air contains gases like oxygen, nitrogen, carbon dioxide and water vapours.

Ans. _____

3. Assertion: Deficiency of iodine causes goitre.

Reason: Swelling or lump in the neck region is a symptom of goitre.

Ans. _____

CASE BASED QUESTIONS:

Read the paragraph carefully and answer the questions that follow:

Midday meal scheme has been launched by the government of India. This scheme is also called School Lunch or School Meal Programme. The aim of this programme is to provide free nutritious food in schools to prevent malnutrition and promote education in rural India. This scheme was first introduced in Chennai in 1920. It has now been implemented by all states of India.

(a) In which state was Midday meal scheme first introduced?

Ans. _____

(b) The scheme is also called One Meal Programme. (TRUE or FALSE)

Ans. _____

(c) What is the aim of this programme?

Ans. _____

Green Land Sr. Sec. Public School

Class – VI

Subject – Science

Assignment – 2

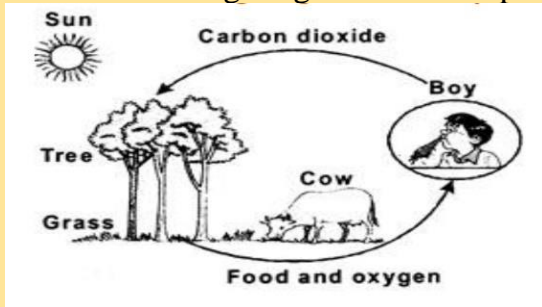
Chapter – 7 (The Living Organisms and Their Surroundings)

Holidays Homework

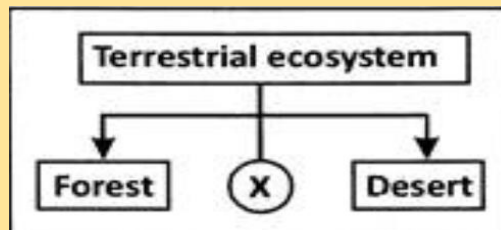
Name: _____ Class: _____ Section: _____

Tick the correct option:

- _____ feed mainly on the dead remains of plants and animals.
(a) Herbivores. (c) Decomposers
(b) Carnivores. (d) Omnivores
- What does the figure given below represent?



- (a) Interdependence between plants.
(b) Interdependence between animals.
(c) Interdependence between plants and animals.
(d) Interdependence between abiotic factors.
- Which statements are true about the tree in hilly areas?
(a) These trees are naturally cone shaped.
(b) They have sloping branches.
(c) The leaves of some trees are needle like.
(d) All of the above.
- Which option is not an adaptation of animals living in polar regions?
(a) Wide and large paws. (c) Thin skin with scales
(b) Layer of fat under skin. (d) Strong sense of smell
- Which of the following is correctly paired?
(a) Desert – Dolphin (c) Terrestrial – Whale
(b) Aquatic – Ant (d) Terrestrial – Deer
- Which of the following is represented by “ X ” in the figure given below:



- (a) Ocean (c) Grassland
(b) Island (d) Snowland

Answer the following questions:

1. The place where living organisms live is called their _____.
2. Define biotic and abiotic components of the environment.

Ans. _____

1. _____
3. What do you mean by acclimatisation?

Ans. _____

4. The habitat of plants and animals that live on land are called _____ habitat.

5. Write two adaptive features of cactus plant to live in desert.

Ans. _____

6. Why are leaves of plants in mountain region reduced to needle - like structures?

Ans. _____

7. Name four animals which are adapted to live in mountain habitat.

Ans. _____

8. What is camouflage?

Ans. _____

9. Some aquatic animals such as dolphins and whales do not have gills. How do these animals breathe?

Ans. _____

10. Write two examples of each: (i) free floating plants, (ii) submerged plants and (iii) emergent plants.

Ans. _____

Case - based questions.

Read the paragraph given below and answer the questions that follow:

Living organisms live everywhere on the earth. They live on land, in oceans, high oceans, high mountains, inside our house and even inside our bodies. They cannot live in isolation. All organisms, whether plants or animals need food and other materials from their surroundings to survive. Everything that surrounds and affects an organism is known as its environment.

- (a) Which one of the following statements is correct?

- (i) All organisms, whether plants or animals need food and other materials from their surroundings to survive.
- (ii) Living organisms cannot live in isolation.
- (iii) Both the statements are correct.
- (iv) None of these is correct.

- (b) Everything that surrounds and affects an organism is known as its:

- (i) Environment
- (ii) Habitat
- (iii) Adaptation
- (iv) none of these

- (c) Where do living organisms live on earth?

Ans. _____

Green Land Sr. Sec. Public School

Class – VI

Subject – Science

Assignment – 3

Chapter – 8 (Motion and Measurement of Distance)

Holidays Homework

Name - _____ Class - _____ Section- _____

Answer the following:

1. Define the following terms:-

(a) Measurement - _____

(b) Physical Quantity - _____

2. Fill in the blanks:

(a) The SI unit of length is _____.

(b) The SI unit of time is _____.

(c) When an object moves in a straight line then its motion is called _____ motion.

3. Write two examples for each of the following type of motion:

(a) Translatory motion : _____

(b) Circular motion : _____

(c) Rectilinear motion : _____

(d) Periodic motion : _____

4. Correct and rewrite the statements:-

(a) A car moving along a curved path is an example of Rotatory Motion.

Ans. _____

(b) $1\text{m} = 1000\text{ cm}$

Ans. _____

(c) Standard units of measurement are those that vary from place to place or person to person.

Ans. _____

5. Assertion – Reason based questions.

In the following questions two statements are given – one labelled Assertion (A) and the other labelled Reason (R). Select the correct answer to these questions from the choices (a) , (b) , (c) and (d) as given below:

(a) Both (A) and (R) are true, and (R) is the correct explanation of (A).

(b) Both (A) and (R) are true, and (R) is not the correct explanation of the (A).

(c) (A) is true, but (R) is false.

(d) (A) is false, but (R) is true.

1. Assertion – Any quantity that can be measured is a physical quantity.

Reason: Time is a physical quantity.

Ans. _____

2. Assertion: Ancient people were unable to measure accurately.

Reason: Ancient people did not have any standard methods or tools for measurement.

Ans. _____

3. Assertion: The wheels of a moving vehicle exhibits rotational and translatory motion both.

Reason: Circular motion is the one in which an object moves around a fixed point in a circular path.

Ans. _____

6. Choose the correct option:

(i) The distance between Delhi and Mumbai is usually expressed in units of :

- (a) metre (b) centimetre
(c) millimetre (d) kilometre

(ii) The figure given below shows a measuring scale. Which of the following distance cannot be measured with this scale by using it only once?



- (a) 0.1 m (b) 0.15 m
(c) 0.2 m (d) 0.05 m

(iii) Rahul has a rope which is 2 metres long. The length of this rope in centimetres is _____.

- (a) 2000 (b) 200
(c) 0.20 (d) 20

(iv) Ria was playing a sitar. Sia observed that only the string of sitar was moving and not the whole body of sitar. The motion of the string exhibits _____ motion.

- (a) oscillatory (b) vibratory
(c) periodic (d) circular

(v) Rama's house is 6540 metres from her friend's house. The distance in kilometres is _____

- (a) 6.54 (b) 65400
(c) 0.654 (d) 6.054

Green Land Sr. Sec. Public School, Ludhiana
Class—VI Subject Social Science
Ch-2 Prejudice, Discrimination and Inequality (Civics)
Holidays Homework (Practice Assignment-1)

Q-1 Multiple Choice Questions -

1. More than _____ languages and dialects are spoken in India.
a) 1100 b) 1200 c) 1400 d) 1600
2. When we form a fixed idea or image of certain people, we _____ them.
a) prejudice b) stereotype c) equalise d) discriminate
3. Dalits have now been categorised as the_____.
a) Scheduled Castes b) Scheduled Tribes c) Other Backward Classes d) Generals
4. _____is important for the upliftment of the nation.
a) Discrimination b) Equality c) Prejudice d) Stereotype
5. Gandhiji called the untouchables as _____.
a) Common people b) Mahajan c) Harijan d) None of these

Q-2 Fill in the blanks-

1. _____is a secular state.
2. The _____safeguards the freedom of religion of all people.
3. In our society _____ are treated as unequal in many areas.
4. In the vedic age, people were classified into _____major varnas.
5. _____fought against racial discrimination.

Q-3 Define the following terms–

1. **Prejudice**_____
- _____
2. **Stereotype**_____
- _____
3. **Apartheid**_____
- _____
4. **Dalit**_____
- _____

5. Inequality_____

Q-4 Answer the following questions –

1. What are the various acts of discrimination in the society?

Ans _____

2. What is Gender Equality? Why is it important?

Ans _____

3. What is Constitution? What does our constitution ensure?

Ans _____

4. On what basis are people discriminated in India?

Ans _____

Q-5 State whether the given statements are True or False-

1. The British called Asians as Blacks. _____
2. All religions in the world teach people to be unfair or unjust to others. _____
3. In foreign countries there is no gender bias in doing any housekeeping work. _____
4. Equality gives rise to discrimination. _____
5. Shudras were supposed to be next to God. _____

Green Land Sr. Sec. Public School, Ludhiana
Class—VI **Subject Social Science**
Ch-2 Globe: Latitudes and Longitudes (Geography)
Holidays Homework (Practice Assignment-2)

Q-1 Multiple Choice Questions -

1. Which of these cannot be shown on a globe in their correct size?

- a) Countries b) Villages c) Continents d) Oceans

2. The Equator represents the _____ latitude.

- a) 0° b) $23\frac{1}{2}^\circ$ N c) $23\frac{1}{2}^\circ$ S d) $66\frac{1}{2}^\circ$ N

3. _____ is the coldest zone of the Earth.

- a) The Torrid Zone b) The Temperate Zone c) The Frigid Zone d) None of these

4. The time at the Prime Meridian is called the _____.

- a) Local Time b) Standard Time c) Indian Standard Time d) Greenwich Mean Time

5. The world is divided into _____ time zones of 1 hour each.

- a) 23 b) 24 c) 22 d) 20

Q-2 Fill in the blanks-

1. The network of parallels of latitudes and meridians of longitudes is called _____.

2. _____ is the main longitude. It's value is _____ longitude.

3. The Standard Meridian of India is _____.

4. 180° East and 180° West Meridians are on the same line known as _____.

5. The _____ Zone is neither too hot nor too cold.

Q-3 Write the full form of –

1. IST _____

2. GMT _____

Q-4 Answer the following questions –

1. What is a globe? When and where was the first globe made?

Ans _____

2. What are parallels of latitude and meridians of longitude?

Ans _____

3. How are latitudes important to us?

Ans _____

4. How can we locate a place on the globe?

Ans _____

Q-5 Case Study –

It divides the earth into two equal halves called the hemispheres. To the north of the Equator is the Northern Hemisphere and to the South is the Southern Hemisphere . It is the reference or the basic line that helps to draw and name other horizontal lines parallel to it and indicates whether they are North or South of the Equator. Since it is the starting line, it is marked as 0°.

Answer the following questions on the basis of the source given above-

1. Which is the longest line of latitude?

Ans- _____

2. There are _____parallels in each hemisphere.

3. What are Northern Latitudes and Southern Latitudes?

Ans-

Green Land Sr. Sec. Public School

Class-VI

Subject- Social Science

Holidays Homework (Assignment No. 3)

Geography Ch-1 The Solar System & Civics Ch-1 Diversity

Q-1. What is a cluster of millions of stars called?

- A) Constellation B) Comet C) Satellite D) Galaxy

Q-2. What is the hindi name of planet “Mars”? _____

Q-3. The Full Moon Night is also known as Amavasya. (True/False)

Q-4. _____ was the first man to land on the moon.

Q-5. Write the name of any one dwarf planet. _____

Q-6. Which of these is not a tertiary activity?

- A) Transportation B) Dairy Farming C) Banking D) Communication

Q-7. West Bengal is rich in minerals. (True/False)

Q-8. _____ is both unifying and dividing force.

Q-9. When do we celebrate Republic Day? _____


Q-10. What do you mean by Constellation? Name any one Constellation.

Ans _____

Q-11. Who practiced the policy of “Divide and Rule” and why?

Ans _____

Q-12. Picture Based Question-



- a) Identify the person in the given picture. _____
b) What was written by him? (National Anthem/ National Song).

Q-13. Write any three points about the largest planet of the Solar System.

Ans _____

Q-14. Mention any three factors that promote Unity in India.

Ans _____

Q-15 . What are Asteroids and Comets? Explain in brief.

Ans _____

Q-16. Case Based Question-

Read the following source and answer the questions that follow-

India is known as a land of festivals. Persons belonging to different religions celebrate different festivals. Holi ,Diwali ,Rakshabandhan , Dussehra and Janmashtami are the main festivals of the Hindus. Eid is an important festival of the Muslims. Baisakhi is the harvest festival of Punjab.

Q-1. Which is the harvest festival of Assam? _____

Q-2. Onam is celebrated in _____.

Q-3. Name any two national festivals celebrated in India.

Ans- _____

ग्रीन लैंड सीनियर सेकेंडरी पब्लिक स्कूल, लुधियाना

कक्षा - छठी, विषय - हिंदी

[कार्यपत्रक -1] (पाठ -3 निर्मल परी)

ग्रीष्मावकाश - गृहकार्य

नाम: कक्षा: अनुभाग: दिनांक:

[1.] रिक्त स्थानों की पूर्ति करें -

(i) एक दिन सुरसती से की कहानी सुनकर उसे लगा, 'हाँ-हाँ, बच्चे भी कुछ कर सकते हैं । '

(ii) जियावनपुर में तो लोग को देवी की तरह पूजते हैं ।

(iii) गाँव-कसबों और शहर के लोग उसे प्यार से भी कहकर याद करते हैं ।

(iv) उसके बुद्धूपन की बातें सुनकर हँसती है ।

(v) उसने सोचा कुछ अलग सा होना चाहिए ।

(vi) यह न होती, तो कितना अच्छा होता अपना जियावानपुर !

(vii) वह पकड़कर देर तक बस हँसती जा रही है ।

(viii) जल्दी ही जानकीबाई की नन्ही का फल दिखाई देने लगा ।

(ix) सुबह उठकर जानकीबाई हर रोज़ अपना काम शुरू करने लगी ।

(x) अब उसकी पूरी उमंग के साथ गीत गाते-गाते अपने काम में जुट जाती ।

[2.] निम्नलिखित शब्दों के अर्थ स्पष्ट करें -

(i) कौतूहल

(ii) कौँधी

(iii) बुद्धूपन

(iv) संकल्प

(v) फुसफुसाकर

(vi) स्वच्छता

[3.] निम्नलिखित प्रश्नों के उत्तर दीजिए -

(क) 'निर्मल परी' पाठ के लेखक का क्या नाम है ?

(ख) जानकीबाई कहाँ की रहने वाली थी ?

(ग) जानकीबाई की अम्मा क्या काम करती थी ?

(घ) जानकीबाई क्या सोचती थी ?

(ड) रिमझिम परी की कहानी सुनकर उसे क्या लगा ?

(च) एक बड़े से थैले का जानकीबाई ने क्या किया ?

(छ) जानकीबाई को अब सुबह-सुबह कौन उठाने लगा और क्यों ?

(ज) जियावनपुर की शकल किसने बदल डाली और लोग अब उसे किस नाम से जानने लगे ?

(झ) लोग बाज़ार से क्या-क्या खरीदकर खाते हैं और किसे जहाँ-तहाँ फेंक देते हैं ?

ग्रीन लैंड सीनियर सेकेंडरी पब्लिक स्कूल, लुधियाना

कक्षा - छठी, विषय - हिंदी

[कार्यपत्रक -2] (पाठ -4 समय से अनुरोध)

ग्रीष्मावकाश - गृहकार्य

नाम: कक्षा: अनुभाग: दिनांक:

[1.] निम्नलिखित प्रश्नों के उत्तर दीजिए -

(क) 'समय से अनुरोध' कविता के रचयिता कौन है ?

.....

(ख) 'समय से अनुरोध' कविता में कवि किसे याद रखने की बात कर रहा है ?

.....

(ग) 'समय से अनुरोध' कविता में संगी-साथी का क्या अर्थ होता है ?

.....

(घ) प्रस्तुत कविता की पंक्तियों में क्या बाकी न बची होने की बात हो रही है ?

.....

(ङ) क्या सिर्फ मित्र ही संगी-साथी होता है ? इसे अपने शब्दों में स्पष्ट कीजिए ।

.....

.....

(च) निम्नलिखित पंक्तियों का आशय स्पष्ट कीजिए -

(i) "कैसे मैं अपनी रोशनी बचाए रखूँ । "

.....

.....

(ii) "ताकि वह लड़का उधार लाई महँगी किताब एक रात में ही पूरी पढ़ सके । "

.....

.....

(छ) जीवन जीने के लिए कवि समय से क्या सुनना चाहता है ?

.....

(ज) कवि समय से किसकी गाथा सुनना चाहता है ?

.....

.....

(झ) 'समय से अनुरोध' कविता में आए शब्द 'गिड़गिड़ाए' में कितनी मात्राएँ हैं ?

.....

ग्रीन लैंड सीनियर सेकेंडरी पब्लिक स्कूल, लुधियाना

कक्षा – छठी, विषय—हिंदी

[कार्यपत्रक 3 – व्याकरण भाग]

ग्रीष्मावकाश - गृहकार्य

नाम: कक्षा: अनुभाग : दिनांक:

[1.] निम्नलिखित अपठित गद्यांश को पढ़कर उस पर आधारित प्रश्नों के उत्तर लिखिए :

अनपढ़ व्यक्ति पशु के समान होता है । पढ़-लिखकर व्यक्ति जीवन को सच्चे अर्थों में जीना सीखता है । अनपढ़ और सुशिक्षित व्यक्ति से बातचीत करते ही दोनों में अंतर स्पष्ट हो जाता है । कुछ लोग सोचते हैं कि पढ़ने से अच्छी नौकरियाँ मिलती हैं । पढ़कर ऊँचे-ऊँचे पद मिलते हैं । अच्छा वेतन मिलता है । वास्तव में नौकरी प्राप्त करने के लिए ही शिक्षा ग्रहण नहीं की जाती । शिक्षा का अर्थ होता है-ज्ञान प्राप्त करके अपना, समाज का और देश का विकास और कल्याण करना । अपने लिए तो पशु भी जीता है । शिक्षा से हम दूसरों के लिए जीना सीखते हैं । यही श्रेष्ठ मनुष्य की पहचान है ।

(क) व्यक्ति सच्चा जीवन जीना किस प्रकार सीखता है ?

(ख) कुछ लोग शिक्षा के प्रति क्या सोच रखते हैं ?

(ग) शिक्षा का क्या अर्थ है ?

(घ) श्रेष्ठ मनुष्य की क्या पहचान है ?

(ङ) अनपढ़ व्यक्ति किसके समान है ?

[2.] निम्नलिखित प्रश्नों के उत्तर दीजिए :

(i) भारत में 'हिंदी दिवस' कब मनाया जाता है ?

(ii) 'विश्व हिंदी दिवस' कब मनाया जाता है ?

(iii) भाषा के कितने कौशल हैं? उनके नाम भी लिखें ।

(iv) भाषा के कितने भेद हैं ? उनके नाम भी लिखें ।

(v) हिंदी भाषा में कुल कितने संयुक्त व्यंजन हैं ?

[3.] नीचे लिखे वाक्यों में से संज्ञा शब्द छाँटिए और उनके सामने संज्ञा के भेद लिखिए –

(i) हमारा विद्यालय बहुत बड़ा है । -----

(ii) 'रामचरितमानस' की रचना गोस्वामी तुलसीदास जी ने की थी । -----



Green Land Sr. Sec. Public School

Class VI Punjabi Assignment No. 1

ਛੁੱਟੀਆਂ ਦਾ ਕੰਮ

Name _____ Section _____ Roll no. _____

ਪਾਠ - 3 ਬੰਦਾ ਸਿੰਘ ਬਹਾਦਰ ਜੀ

1. ਹੇਠ ਲਿਖੇ ਪ੍ਰਸ਼ਨਾਂ ਦੇ ਉੱਤਰ ਲਿਖੋ:-

1. ਬੰਦਾ ਸਿੰਘ ਬਹਾਦਰ ਦਾ ਮੁਢਲਾ ਨਾਂ ਕੀ ਸੀ?

2. ਮਾਧੋ ਦਾਸ ਨੇ ਕਿਸ ਦੇ ਛੱਕੇ ਛੁਡਾਉਣ ਦਾ ਪ੍ਰਣ ਕਰ ਲਿਆ ਸੀ?

3. ਬੰਦਾ ਸਿੰਘ ਬਹਾਦਰ ਦੀਆਂ ਅੱਖਾਂ ਅੱਗੇ ਵਾਰ-ਵਾਰ ਕਿਹੜਾ ਦ੍ਰਿਸ਼ ਵਿਖਾਈ ਦਿੰਦਾ ਸੀ?

4. ਸਭ ਤੋਂ ਪਹਿਲਾਂ ਬੰਦਾ ਸਿੰਘ ਬਹਾਦਰ ਨੇ ਕਿਸ ਨੂੰ ਆਪਣੇ ਅਧੀਨ ਕਰ ਲਿਆ ?

5. ਬੰਦਾ ਸਿੰਘ ਬਹਾਦਰ ਅਤੇ ਵਜ਼ੀਰ ਖਾਂ ਦਾ ਯੁੱਧ ਕਿਹੜੇ ਸਥਾਨ 'ਤੇ ਹੋਇਆ ?

6. ਬੰਦਾ ਸਿੰਘ ਬਹਾਦਰ ਨੇ ਕਿਹੜੀ ਪ੍ਰਥਾ ਦਾ ਖਾਤਮਾ ਕੀਤਾ ਸੀ ?

7. ਬੰਦਾ ਸਿੰਘ ਬਹਾਦਰ ਅਤੇ ਉਸ ਦੇ ਸਾਥੀਆਂ ਨੂੰ ਕਦੋਂ ਕੈਦ ਕੀਤਾ ਗਿਆ ?

8. ਬੰਦਾ ਸਿੰਘ ਬਹਾਦਰ ਨੂੰ ਕਦੋਂ ਸ਼ਹੀਦ ਕੀਤਾ ਗਿਆ?

9. ਬੰਦਾ ਸਿੰਘ ਬਹਾਦਰ ਨੇ ਕਿਹੜੇ-ਕਿਹੜੇ ਇਲਾਕਿਆਂ ਉੱਤੇ ਫ਼ਤਹਿ ਪ੍ਰਾਪਤ ਕੀਤੀ?

2. ਹੇਠ ਲਿਖੀਆਂ ਖ਼ਾਲੀ ਥਾਵਾਂ ਭਰੋ :-

1. ਬੰਦਾ ਸਿੰਘ ਬਹਾਦਰ ਦਾ ਜਨਮ _____ ਈਸਵੀ ਵਿੱਚ ਹੋਇਆ।

2. ਬੰਦਾ ਸਿੰਘ ਬਹਾਦਰ ਦਾ ਨਾਂ _____ ਪਛਾਣ ਰੱਖਦਾ ਹੈ।

3. ਸ੍ਰੀ ਗੁਰੂ ਗੋਬਿੰਦ ਸਿੰਘ ਜੀ ਨੇ ਮਾਧੋ ਦਾਸ ਨੂੰ _____ ਦਾ ਅੰਮ੍ਰਿਤ ਛਕਾ ਕੇ ਸਿੰਘ ਸਜਾ ਦਿੱਤਾ।

4. ਗੁਰੂ ਜੀ ਖਿਦਰਾਣੇ ਦੇ ਯੁੱਧ ਤੋਂ ਬਾਅਦ _____ ਨਦੀ ਦੇ ਕੰਢੇ ਪੁੱਜੇ।

5. ਬੰਦਾ ਸਿੰਘ ਬਹਾਦਰ ਨੇ ਸ਼ਿਕਾਰ ਦਾ ਤਿਆਗ ਕਰਕੇ _____ ਜੀਵਨ ਜੀਉਣ ਦਾ ਫੈਸਲਾ ਕੀਤਾ।

3. ਹੇਠ ਲਿਖੇ ਵਾਕਾਂ ਵਿੱਚ ਸਹੀ ਅੱਗੇ (ਸਹੀ) ਅਤੇ ਗਲਤ ਅੱਗੇ (ਗ਼ਲਤ)ਦਾ ਨਿਸ਼ਾਨ ਲਗਾਓ:-

1. ਬੰਦਾ ਸਿੰਘ ਬਹਾਦਰ ਨੂੰ ਗੁਰੂ ਜੀ ਨੇ ਤਿੰਨ ਤੀਰ ਦੇ ਕੇ ਪੰਜਾਬ ਵੱਲ ਤੋਰ ਦਿੱਤਾ।

2. ਛੋਟੀ ਉਮਰ ਵਿੱਚ ਮਾਧੋਦਾਸ ਨੂੰ ਸ਼ਿਕਾਰ ਖੇਡਣ ਦਾ ਸ਼ੌਕ ਸੀ।

3. ਇੱਕ ਤੀਰ ਹਿਰਨੀ ਦੇ ਮੱਥੇ 'ਤੇ ਜਾ ਲੱਗਾ।
4. ਬੰਦਾ ਸਿੰਘ ਬਹਾਦਰ ਨੂੰ 1710 ਈਸਵੀ ਨੂੰ ਕੈਦ ਕਰ ਲਿਆ ਗਿਆ।
5. ਬੰਦਾ ਬਹਾਦਰ ਦਾ ਜਨਮ ਪੰਜਾਬ ਵਿੱਚ ਹੋਇਆ।

4. ਹੇਠ ਲਿਖੇ ਸ਼ਬਦਾਂ ਦੇ ਅਰਥ ਲਿਖੋ:-

- | | |
|------------------------|-----------------------|
| 1. ਵਿਲੱਖਣ _____ | 6. ਨਵਾਂ ਮੋੜ _____ |
| 2. ਤਸੀਹੇ _____ | 7. ਸ਼ਖਸੀਅਤ _____ |
| 3. ਟੱਕਰ ਲੈਣਾ _____ | 8. ਸ਼ਾਗਿਰਦ _____ |
| 4. ਮੁਹਿੰਮ ਚਲਾਉਣਾ _____ | 9. ਕਬਜ਼ਾ ਕਰਨਾ _____ |
| 5. ਅਗਵਾਈ _____ | 10. ਧੁੰਮਾਂ ਪੈਣਾ _____ |

5. ਹੇਠ ਲਿਖੇ ਸ਼ਬਦਾਂ ਨੂੰ ਵਾਕਾਂ ਵਿੱਚ ਵਰਤੋ:-

1. ਸੁਰਮਾ _____
2. ਪਰਿਵਾਰ _____
3. ਸ਼ਹੀਦ _____
4. ਖੇਤੀਬਾੜੀ _____
5. ਕਬਜ਼ਾ _____
6. ਤਸੀਹੇ _____



ਗਰੀਨ ਲੈਂਡ ਸੀਨੀਅਰ ਸੈਕੰਡਰੀ ਪਬਲਿਕ ਸਕੂਲ

ਅਸਾਈਨਮੈਂਟ- 2

ਛੁੱਟੀਆਂ ਦਾ ਕੰਮ

ਜਮਾਤ: ਛੇਵੀਂ

Name _____ Section _____ Roll no. _____

ਵਿਸ਼ਾ: ਪੰਜਾਬੀ

ਪਾਠ- 5 ਮੇਬਾਈਲ ਦੀ ਸੁਚੱਜੀ ਵਰਤੋਂ

(1) ਹੇਠ ਲਿਖੇ ਸ਼ਬਦਾਂ ਦੇ ਅਰਥ ਲਿਖੋ:-

ੳ) ਵਿਅਸਤ _____

ਸ) ਆਸਰੇ _____

ਅ) ਸੁਚੇਤ _____

ਹ) ਵਰਜਸ਼ _____

ੲ) ਪਰੇਸ਼ਾਨੀ _____

ਕ). ਵਿਆਪਕ _____

(2). ਹੇਠ ਲਿਖੇ ਪ੍ਰਸ਼ਨਾਂ ਦੇ ਉੱਤਰ ਇੱਕ-ਦੋ ਵਾਕਾਂ ਵਿੱਚ ਦਿਓ:-

ੳ) ਮਨਜੀਤ ਦੇ ਮਾਤਾ-ਪਿਤਾ ਕਿੱਥੇ ਗਏ?

ਅ). ਮਨਜੀਤ ਦੇ ਮਾਤਾ-ਪਿਤਾ ਨੇ ਅਧਿਆਪਕਾ ਨੂੰ ਮਨਜੀਤ ਦੇ ਕੀ ਚਲਾਉਣ ਬਾਰੇ ਦੱਸਿਆ?

ੲ). ਮਨਜੀਤ ਪੜ੍ਹਾਈ ਵਿੱਚ ਕਿਹੋ ਜਿਹਾ ਸੀ?

ਸ) ਬਾਲ ਸਭਾ ਵਿੱਚ ਬੱਚੇ ਕੀ ਕਰਦੇ ਹਨ?

ਹ) ਅਧਿਆਪਕਾ ਨੇ ਕਿਸ ਬਾਰੇ ਮਨਜੀਤ ਦੇ ਮਾਤਾ-ਪਿਤਾ ਨਾਲ ਕੋਈ ਜ਼ਿਕਰ ਨਾ ਕੀਤਾ?

ਕ) ਕਿਹੜੀਆਂ ਚੀਜ਼ਾਂ ਬਰੈਰ ਸਾਨੂੰ ਸਾਡਾ ਜੀਵਨ ਅਧੂਰਾ ਲੱਗਦਾ ਹੈ?

ਖ). ਮਨਜੀਤ ਨੂੰ ਅਧਿਆਪਕਾ ਦੀ ਕਹੀ ਗੱਲ ਕਿਹੋ ਜਿਹੀ ਲੱਗੀ?

ਗ) ਮਾਤਾ ਪਿਤਾ ਦੁਆਰਾ ਕੰਮ ਕਰੇ ਜਾਣ ਤੇ ਮਨਜੀਤ ਕੀ ਬਹਾਨਾ ਬਣਾਉਂਦਾ ਸੀ?

ਘ). ਮਨਜੀਤ ਨੂੰ ਕਿੰਨੀ ਕੁ ਮਿਹਨਤ ਦੀ ਲੋੜ ਸੀ?

.ਚ) ਮਨਜੀਤ ਨੇ ਅੰਤ ਵਿੱਚ ਕੀ ਪ੍ਰਣ ਕੀਤਾ?

(3) ਹੇਠ ਲਿਖੀਆਂ ਖਾਲੀ ਥਾਵਾਂ ਭਰੋ:-

ੳ) ਮਨਜੀਤ ਪੜ੍ਹਾਈ ਵਿੱਚ ਠੀਕ-ਠਾਕ _____ ਰਿਹਾ ਹੈ।

ਅ) ਜ਼ਿਆਦਾ ਦੇਰ ਬੈਠੇ ਰਹਿਣ ਨਾਲ ਸਾਡੇ _____ ਦੀ ਵਰਜਸ਼ ਵੀ ਨਹੀਂ ਹੁੰਦੀ।

ੲ) ਤੁਸੀਂ ਸਭ ਨੇ ਜ਼ਿੰਦਗੀ ਭਰ ਇਸ ਤੋਂ _____ ਰਹਿਣਾ ਹੈ।

ਸ) ਸਾਰੇ ਬੱਚੇ ਬੜੀ _____ ਨਾਲ ਅਧਿਆਪਕਾ ਦੀ ਗੱਲ ਸੁਣ ਰਹੇ ਸਨ।

ਹ) ਪੁਰਾਤਨ ਯੁੱਗ ਦੇ ਮਨੁੱਖ ਕੋਲ ਬੜੀਆਂ _____ ਜਿਹੀਆਂ ਚੀਜ਼ਾਂ ਸਨ।

ਕ) _____ ਮਨਜੀਤ ਦੀ ਪੜ੍ਹਾਈ ਨੂੰ ਲੈ ਕੇ ਚਿੰਤਤ ਸਨ।

(4) ਹੇਠ ਲਿਖੇ ਸ਼ਬਦਾਂ ਨੂੰ ਵਾਕਾਂ ਵਿੱਚ ਵਰਤੋ:-

ੳ) ਪੜ੍ਹਾਈ _____

ਅ) ਧਿਆਨ _____

ੲ) ਮਨੁੱਖ _____

ਸ) ਜੀਵਨ _____

ਹ) ਸੁਚੇਤ _____

ਕ) ਪਰੇਸ਼ਾਨੀ _____

ਗਰੀਨ ਲੈਂਡ ਸੀਨੀਅਰ ਸੈਕੰਡਰੀ ਪਬਲਿਕ ਸਕੂਲ

ਛੁੱਟੀਆਂ ਦਾ ਕੰਮ

ਜਮਾਤ: ਛੇਵੀਂ

ਪੰਜਾਬੀ ਅਸਾਈਨਮੈਂਟ 3

ਵਿਸ਼ਾ: ਪੰਜਾਬੀ

Name _____ Section _____ Roll No. _____

1. ਹੇਠ ਲਿਖੇ ਸ਼ਬਦਾਂ ਦੇ ਅਰਥ ਲਿਖੋ:-

ੳ) ਦਾਦਕੇ _____ ਅ) ਅਫ਼ਵਾਹ _____

2. ਹੇਠ ਲਿਖੀਆਂ ਖਾਲੀ ਥਾਵਾਂ ਭਰੋ:-

ੳ) ਦਾਦਕਿਆਂ ਘਰ ਸ਼ਰਨਜੀਤ ਨੂੰ ਕੋਈ _____ ਮਹਿਸੂਸ ਨਾ ਹੁੰਦੀ ਸੀ ।

ਅ) ਮਾਰਚ _____ ਚੱਲ ਰਿਹਾ ਸੀ ।

3. ਹੇਠਾਂ ਦਿੱਤੇ ਵਾਕਾਂ ਵਿੱਚ ਸਹੀ ਵਾਕ ਅੱਗੇ \checkmark ਅਤੇ ਗਲਤ ਵਾਕ ਅੱਗੇ \times ਦਾ ਨਿਸ਼ਾਨ ਲਗਾਓ :-

ੳ) ਸ਼ਹਿਰੀ ਮਾਹੌਲ ਖੁੱਲ੍ਹਾ - ਡੁੱਲ੍ਹਾ ਹੁੰਦਾ ਹੈ ।

ਅ) ਸ਼ਰਨਜੀਤ ਦੇ ਮਾਤਾ- ਪਿਤਾ ਵੱਲੋਂ ਵੀ ਜਨਮ- ਦਿਨ ਦੀਆਂ ਪੂਰੀਆਂ ਤਿਆਰੀਆਂ ਸਨ ।

4. ਹੇਠ ਲਿਖੇ ਪ੍ਰਸ਼ਨਾਂ ਦੇ ਉੱਤਰ ਇੱਕ - ਦੋ ਵਾਕਾਂ ਵਿੱਚ ਦਿਓ:-

ੳ) ਸ਼ਰਨਜੀਤ ਦੇ ਦਾਦਾ- ਦਾਦੀ ਕਿੱਥੇ ਰਹਿੰਦੇ ਸਨ ?

ਅ) ਕਿਸ ਸਾਧਨ ਦੁਆਰਾ ਮਾਪੇ ਸ਼ਰਨਜੀਤ ਦੀ ਖਬਰ ਦਾਦਾ- ਦਾਦੀ ਤੋਂ ਲੈਂਦੇ ਸਨ ?

5. ਹੇਠ ਲਿਖੇ ਪ੍ਰਸ਼ਨਾਂ ਦੇ ਉੱਤਰ ਚਾਰ - ਪੰਜ ਵਾਕਾਂ ਵਿੱਚ ਦਿਓ:-

ੳ) ਸ਼ਰਨਜੀਤ ਦਾਦਕਿਆਂ ਘਰ ਆਪਣਾ ਦਿਨ ਕਿਵੇਂ ਬਿਤਾਉਂਦਾ ਸੀ ?

6. ਹੇਠ ਲਿਖੇ ਕਾਵਿ- ਟੋਟੇ ਨੂੰ ਪੜ੍ਹ ਕੇ ਪੁੱਛੇ ਗਏ ਪ੍ਰਸ਼ਨਾਂ ਦੇ ਉੱਤਰ ਦਿਓ:-

ਹਿੰਦ ਵਾਸੀਓ ਰੱਖਣਾ ਯਾਦ ਸਾਨੂੰ,

ਕਿਤੇ ਦਿਲਾਂ ਤੋਂ ਨਾ ਭੁਲਾ ਜਾਣਾ ।

ਖਾਤਰ ਵਤਨ ਦੀ ਲੱਗੇ ਹਾਂ ਚੜ੍ਹਨ ਫਾਂਸੀ,

ਸਾਨੂੰ ਦੇਖ ਕੇ ਨਹੀਂ ਘਬਰਾ ਜਾਣਾ ।

ੳ) ਉਪਰੋਕਤ ਕਾਵਿ- ਟੋਟਾ ਕਿਸ ਪੁਸਤਕ ਵਿੱਚੋਂ ਲਿਆ ਗਿਆ ਹੈ ?

ਅ) ਵਤਨ ਦੀ ਖ਼ਾਤਰ ਕਿੱਥੇ ਚੜ੍ਹਨ ਲਈ ਕਿਹਾ ਗਿਆ ਹੈ ?

ੲ) ਕਵਿਤਾ ਵਿੱਚ ਕਿੱਥੋਂ ਨਾ ਭੁਲਾ ਜਾਣ ਦੀ ਗੱਲ ਕੀਤੀ ਗਈ ਹੈ ?

7. ਹੇਠ ਲਿਖੇ ਸ਼ਬਦਾਂ ਨੂੰ ਵਾਕਾਂ ਵਿੱਚ ਵਰਤੋ:-

ੳ) ਪਿਆਰ _____

ਅ) ਸ਼ਰਾਰਤ _____

8. ਹੇਠ ਲਿਖੇ ਸ਼ਬਦਾਂ ਦੇ ਵਿਰੋਧੀ ਸ਼ਬਦ ਲਿਖੋ:-

ੳ) ਉੱਪਰ _____ ਅ) ਸਾਫ਼ _____ ਏ) ਇਮਾਨਦਾਰ _____

9. ਹੇਠ ਲਿਖੇ ਅਸ਼ੁੱਧ ਸ਼ਬਦਾਂ ਨੂੰ ਸੁੱਧ ਕਰਕੇ ਲਿਖੋ:-

ੳ) ਸੂਰਯ _____ ਅ) ਪਠਾਨ _____ ਏ) ਨੈਹਰ _____

10. ਬਹੁਤੇ ਸ਼ਬਦਾਂ ਦੀ ਥਾਂ ਇਕ ਸ਼ਬਦ ਲਿਖੋ:-

ੳ) ਮਾਤਾ ਦਾ ਭਰਾ _____

ਅ) ਜਿਸ ਨੂੰ ਸਾਰੇ ਪਿਆਰ ਕਰਦੇ ਹੋਣ _____

ਏ) ਪਿੰਡ ਵਿੱਚ ਰਹਿਣ ਵਾਲਾ _____

11. ਹੇਠ ਲਿਖੇ ਅਣਡਿੱਠੇ ਪੈਰੇ ਨੂੰ ਪੜ੍ਹ ਕੇ ਪੁੱਛੇ ਗਏ ਪ੍ਰਸ਼ਨਾਂ ਦੇ ਉੱਤਰ ਦਿਓ :-

ਰਾਣੀ ਲਕਸ਼ਮੀ ਬਾਈ ਦਾ ਜਨਮ 19 ਨਵੰਬਰ, 1834 ਈਸਵੀ ਨੂੰ ਕਾਸ਼ੀ ਵਿਖੇ ਹੋਇਆ। ਉਸ ਨੂੰ ਸਾਰੇ ਪਿਆਰ ਨਾਲ ਮਨੁ ਆਖਦੇ ਸਨ। ਉਸ ਦੇ ਪਿਤਾ ਦਾ ਨਾਂ ਸੈਰੋਪੰਤ ਤੇ ਮਾਤਾ ਦਾ ਨਾਂ ਭਾਗੀਰਥੀ ਸੀ। ਉਹ ਅਜੇ ਚਾਰ ਸਾਲਾਂ ਦੀ ਹੀ ਸੀ ਕਿ ਉਸ ਦੀ ਮਾਤਾ ਦਾ ਦੇਹਾਂਤ ਹੋ ਗਿਆ। ਮਨੁ ਬਚਪਨ ਤੋਂ ਹੀ ਗੁੱਡੇ-ਗੁੱਡੀਆਂ ਨਾਲ ਖੇਡਣ ਦੀ ਥਾਂ ਤਲਵਾਰ, ਬੰਦੂਕ ਚਲਾਉਣੀ ਤੇ ਘੋੜ-ਸਵਾਰੀ ਸਿੱਖਦੀ ਸੀ। ਉਹ ਮੁਸ਼ਕਲਾਂ ਤੋਂ ਨਹੀਂ ਸੀ ਘਬਰਾਉਂਦੀ ਤੇ ਇੱਕ ਬਹਾਦਰ ਨਾਰੀ ਬਣਨਾ ਚਾਹੁੰਦੀ ਸੀ।

(ੳ) ਲਕਸ਼ਮੀ ਬਾਈ ਦਾ ਜਨਮ ਕਦੋਂ ਤੇ ਕਿੱਥੇ ਹੋਇਆ ?

(ਅ) ਲਕਸ਼ਮੀ ਬਾਈ ਨੂੰ ਕਿਹੜੀਆਂ ਚੀਜ਼ਾਂ ਦਾ ਸ਼ੌਂਕ ਸੀ ?

(ਏ) ਲਕਸ਼ਮੀ ਬਾਈ ਕਿਹੋ ਜਿਹੀ ਨਾਰੀ ਬਣਨਾ ਚਾਹੁੰਦੀ ਸੀ ?

(ਸ) ਲਕਸ਼ਮੀ ਬਾਈ ਦੇ ਮਾਤਾ ਅਤੇ ਪਿਤਾ ਜੀ ਦਾ ਕੀ ਨਾਂ ਸੀ ?

(ਹ) ਲਕਸ਼ਮੀ ਬਾਈ ਨੂੰ ਸਾਰੇ ਪਿਆਰ ਨਾਲ ਕੀ ਆਖਦੇ ਸਨ ?

